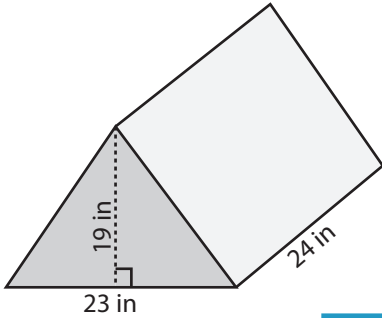


Volume: Prisms & Cylinders

L2MS1

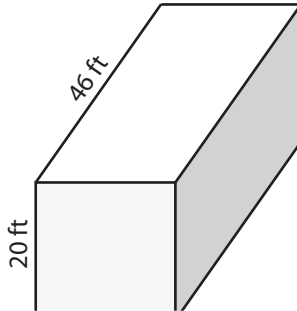
Find the volume of each shape. (use $\pi = 3.14$)

1)



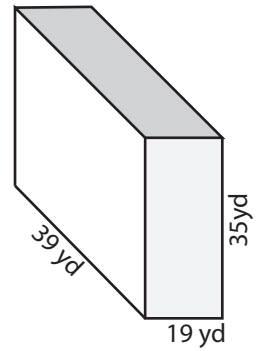
Volume = _____

2)

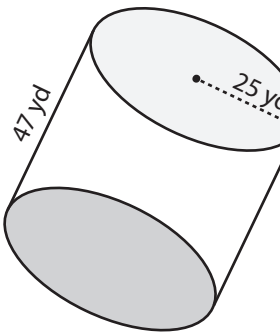


Volume = _____

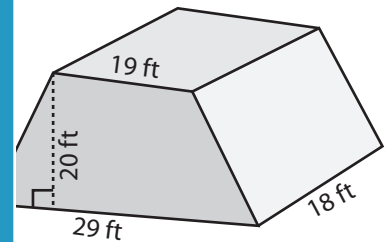
3)



4)

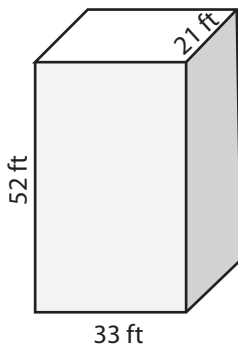


Volume = _____

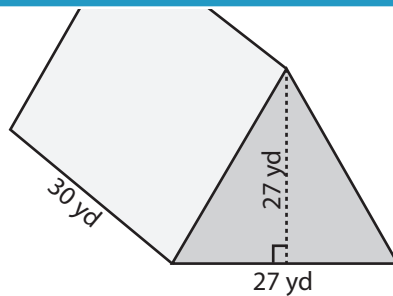


Volume = _____

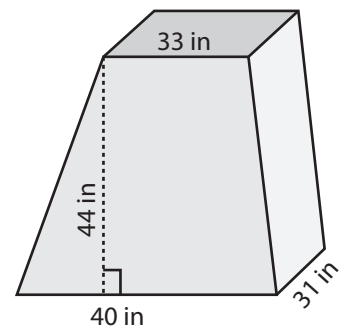
7)



Volume = _____



Volume = _____



Volume = _____

PREVIEW

Access the largest collection of worksheets for just **\$19.95** per year!

Members, please log in to download this worksheet.

Log in

Not a member? Please sign up to gain complete access.

Sign up

www.mathworksheets4kids.com

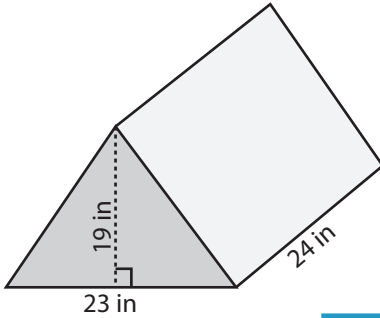
Answer Key

Volume: Prisms & Cylinders

L2MS1

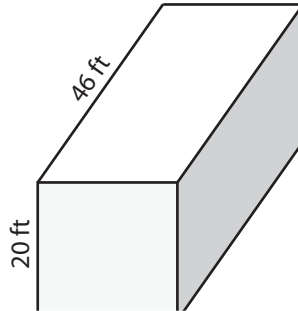
Find the volume of each shape. (use $\pi = 3.14$)

1)



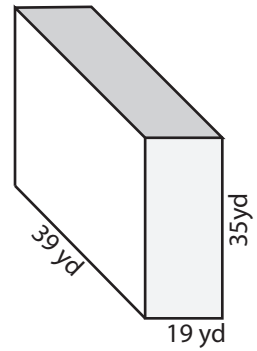
Volume = 5244 in³

2)

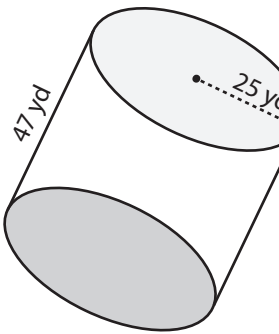


Volume = 25935 yd³

3)



4)



Volume = 92237.5 yd³

Access the largest collection of worksheets for just **\$19.95** per year!

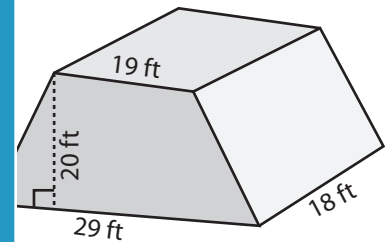
Members, please log in to download this worksheet.

Log in

Not a member? Please sign up to gain complete access.

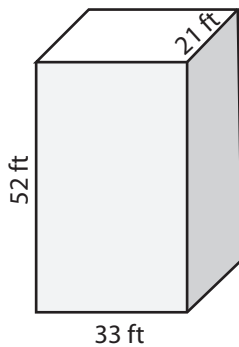
Sign up

www.mathworksheets4kids.com

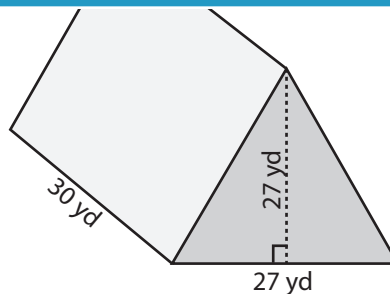


Volume = 8640 ft³

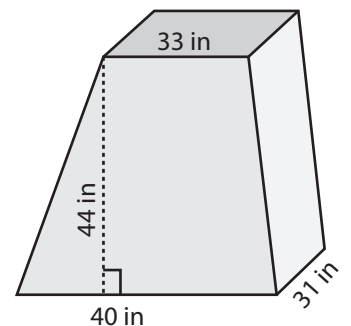
7)



Volume = 36036 ft³



Volume = 10935 yd³



Volume = 49786 in³