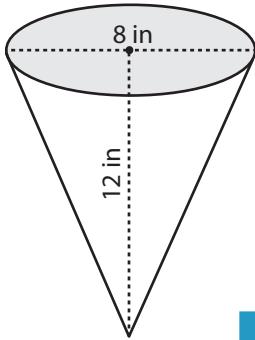


**Volume of Pyramid**

ES3

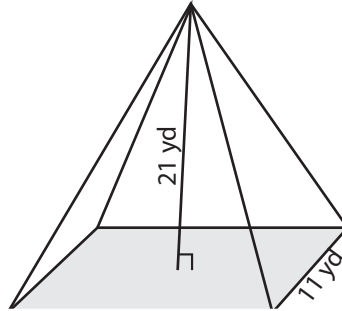
Find the volume of each pyramid. Round the answer to two decimal places.

1)

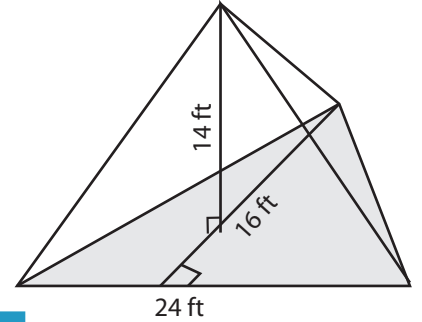


Volume = \_\_\_\_\_

2)

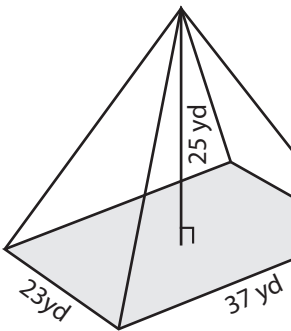


3)



Volume = \_\_\_\_\_

4)



Volume = \_\_\_\_\_

# PREVIEW

Access the largest collection of  
worksheets for just **\$19.95** per year!

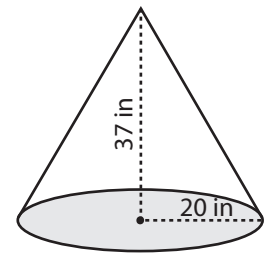
Members, please  
log in to  
download this  
worksheet.

Log in

Not a member?  
Please sign up to  
gain complete  
access.

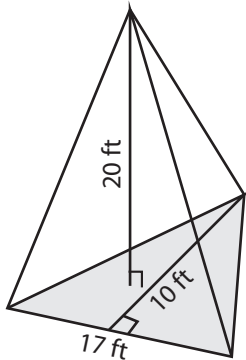
Sign up

[www.mathworksheets4kids.com](http://www.mathworksheets4kids.com)

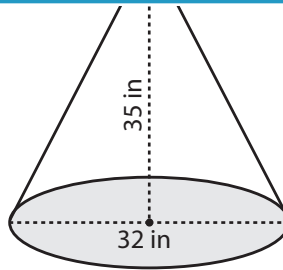


Volume = \_\_\_\_\_

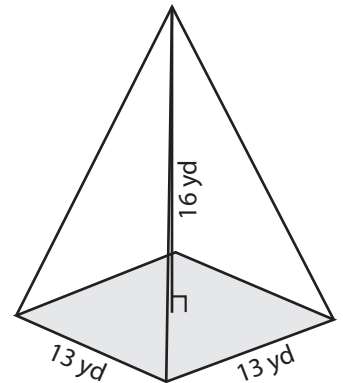
7)



Volume = \_\_\_\_\_



Volume = \_\_\_\_\_



Volume = \_\_\_\_\_

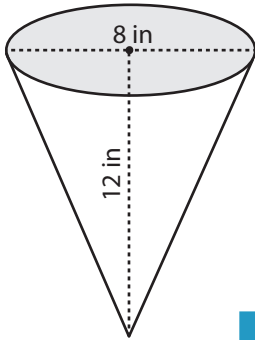
**Answer Key**

**Volume of Pyramid**

ES3

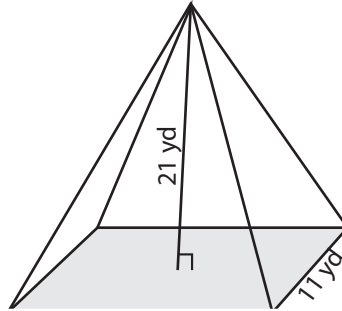
Find the volume of each pyramid. Round the answer to two decimal places.

1)

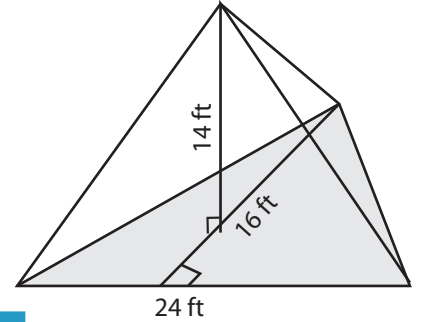


Volume = 200.96 in<sup>3</sup>

2)

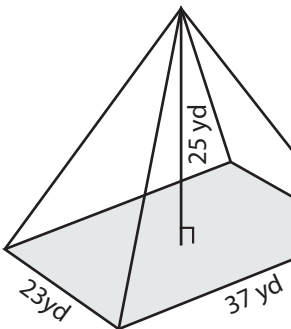


3)



Volume = 896 ft<sup>3</sup>

4)



Volume = 7091.67 yd<sup>3</sup>

**PREVIEW**

Access the largest collection of worksheets for just **\$19.95** per year!

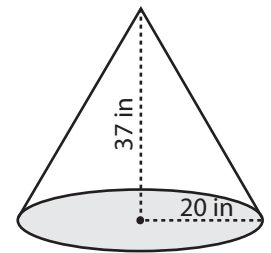
Members, please log in to download this worksheet.

**Log in**

Not a member? Please sign up to gain complete access.

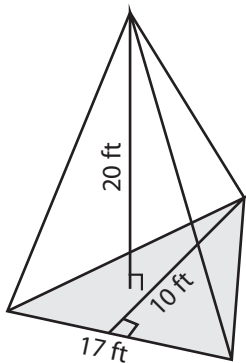
**Sign up**

[www.mathworksheets4kids.com](http://www.mathworksheets4kids.com)

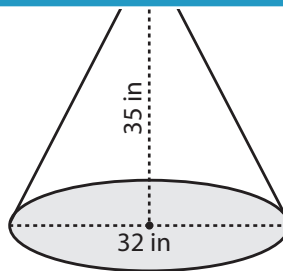


Volume = 15490.67 in<sup>3</sup>

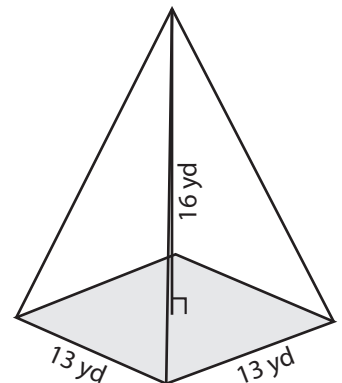
7)



Volume = 566.67 ft<sup>3</sup>



Volume = 9378.13 in<sup>3</sup>



Volume = 901.33 yd<sup>3</sup>