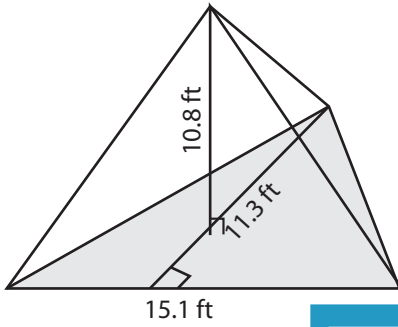


Volume of Pyramid

MS3

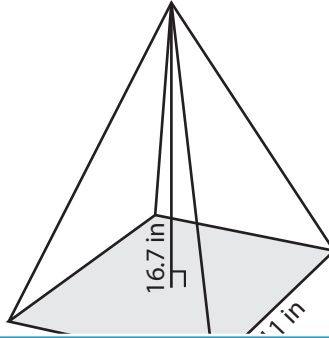
Find the volume of each pyramid. Round the answer to two decimal places.

1)



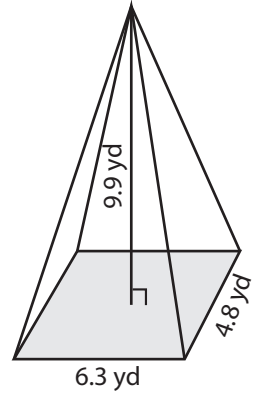
Volume = _____

2)

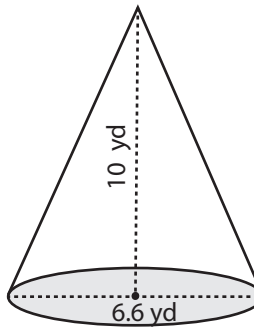


Volume = _____

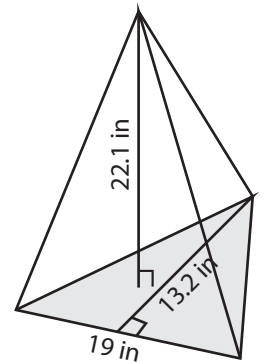
3)



4)

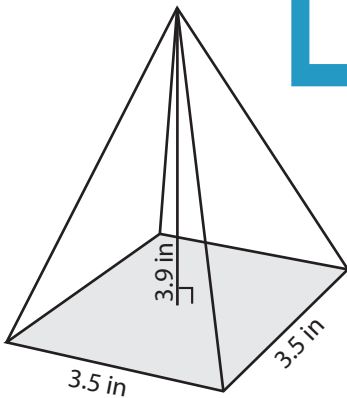


Volume = _____

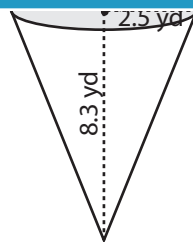


Volume = _____

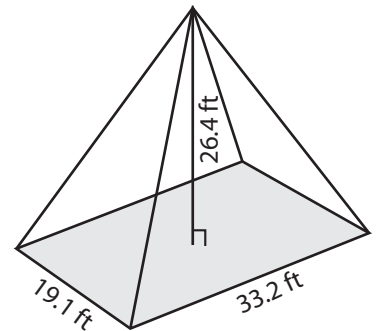
7)



Volume = _____



Volume = _____



Volume = _____

PREVIEW

Access the largest collection of worksheets for just **\$19.95** per year!

Members, please
log in to
download this
worksheet.

Log in

Not a member?
Please sign up to
gain complete
access.

Sign up

www.mathworksheets4kids.com

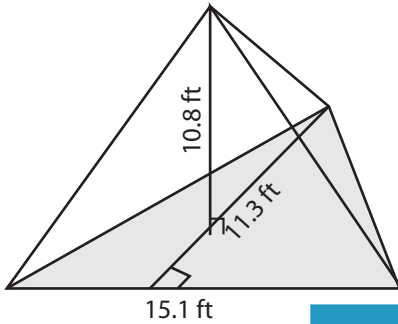
Answer Key

Volume of Pyramid

MS3

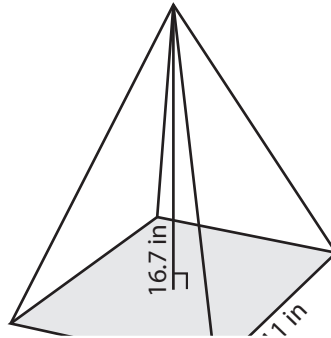
Find the volume of each pyramid. Round the answer to two decimal places.

1)



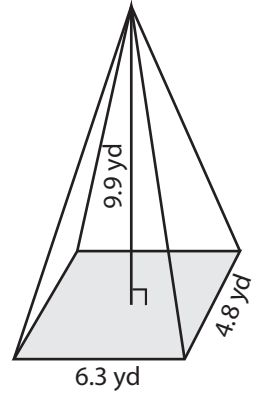
Volume = 307.13 ft³

2)



Volume = 99.79 yd³

3)



PREVIEW

Access the largest collection of worksheets for just **\$19.95** per year!

Members, please log in to download this worksheet.

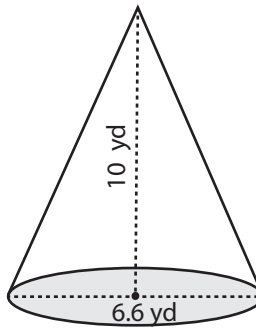
Log in

Not a member? Please sign up to gain complete access.

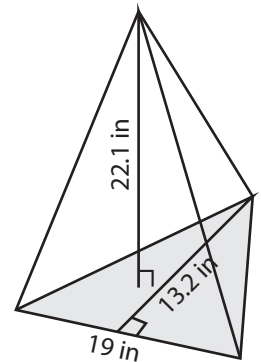
Sign up

www.mathworksheets4kids.com

4)

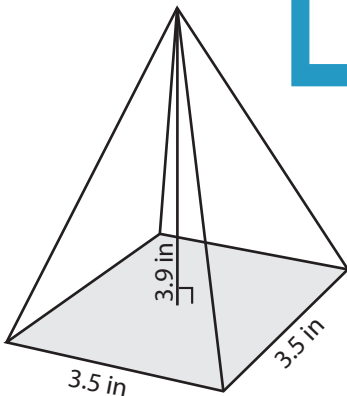


Volume = 113.98 yd³

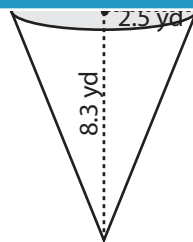


Volume = 923.78 in³

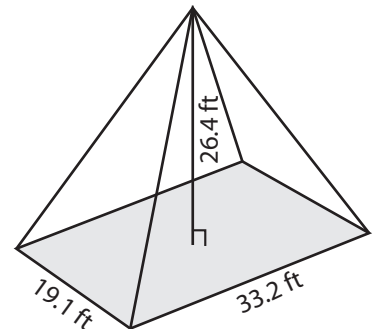
7)



Volume = 15.93 in³



Volume = 54.3 yd³



Volume = 5580.26 ft³