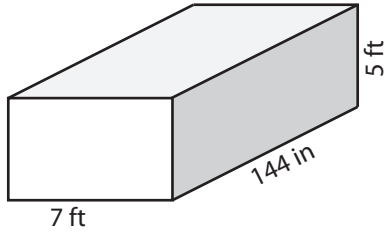


Volume - Rectangular Prism

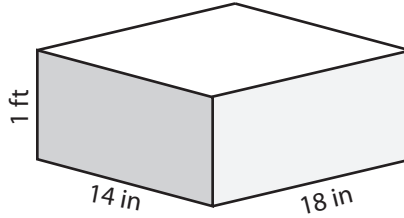
CS2

Find the volume of each rectangular prism.

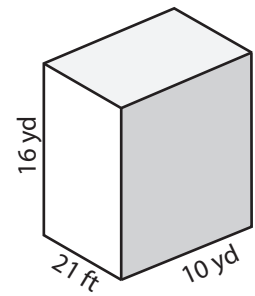
1)

Volume = _____ ft^3

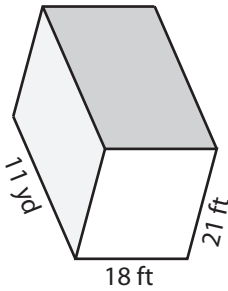
2)

Volume = _____ in^3

3)

Volume = _____ yd^3

4)



Volume = _____

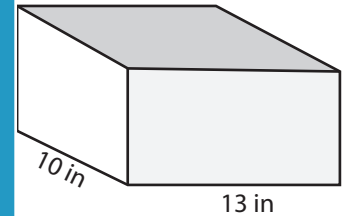
PREVIEW

Access the largest collection of
worksheets for just **\$19.95** per year!

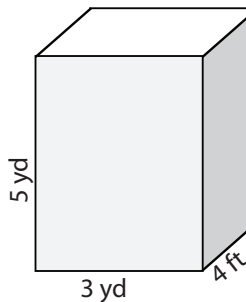
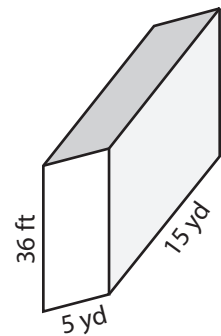
Members, please
log in to
download this
worksheet.

Not a member?
Please sign up to
gain complete
access.

www.mathworksheets4kids.com

Volume = _____ in^3

7)

Volume = _____ ft^3 Volume = _____ in^3 Volume = _____ yd^3

10) A box of milk powder has a length of 12 feet, a width of 6 feet and a height of 84 inch. Find the volume of milk powder does it hold?

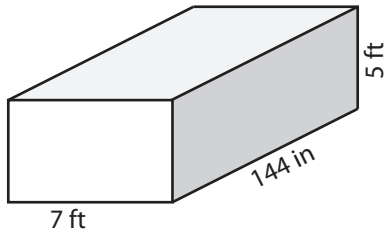
Volume = _____ ft^3

Volume - Rectangular Prism

CS2

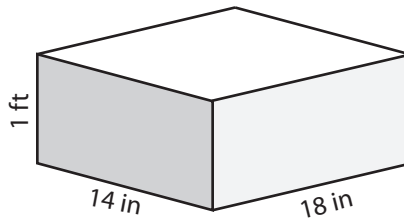
Find the volume of each rectangular prism.

1)



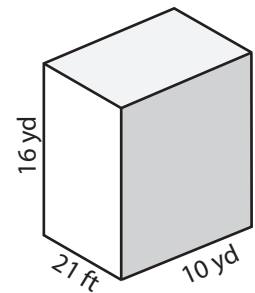
Volume = 420 ft³

2)



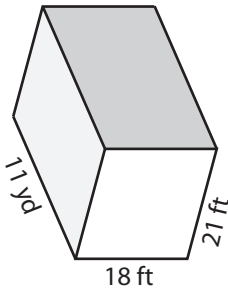
Volume = 3024 in³

3)



Volume = 1120 yd³

4)



Volume = 462

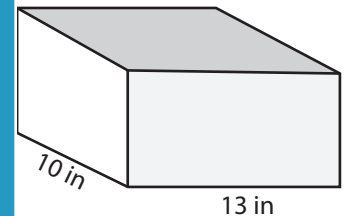
PREVIEW

Access the largest collection of worksheets for just **\$19.95** per year!

Members, please
log in to
download this
worksheet.

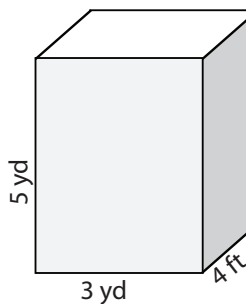
Log in

Not a member?
Please sign up to
gain complete
access.

Sign upwww.mathworksheets4kids.com

Volume = 1170 in³

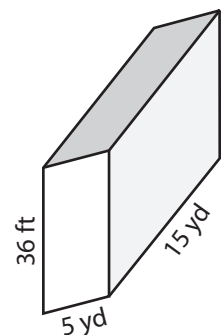
7)



Volume = 540 ft³

Volume = 72 in³

Volume = 900 yd³



10) A box of milk powder has a length of 12 feet, a width of 6 feet and a height of 84 inch. Find the volume of milk powder does it hold?

Volume = 504 ft³