

Name : _____

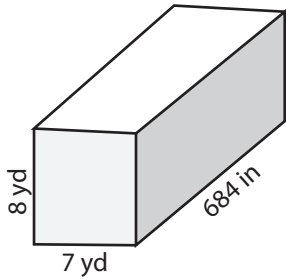
Score : _____

Volume - Rectangular Prism

CS3

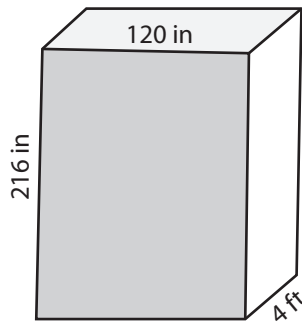
Find the volume of each rectangular prism.

1)



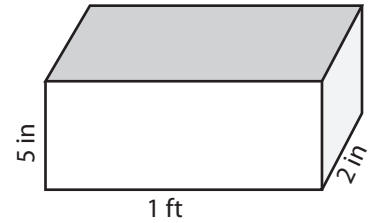
Volume = _____ yd³

2)



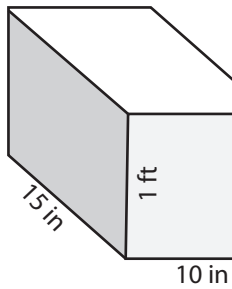
Volume = _____ ft³

3)

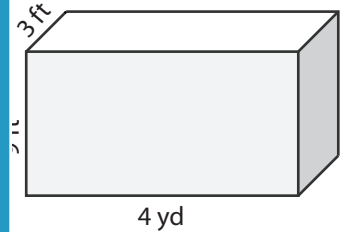


Volume = _____ in³

4)

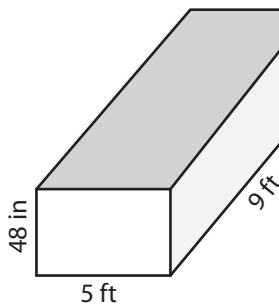


Volume = _____



Volume = _____ ft³

7)



Volume = _____ ft³

PREVIEW

Access the largest collection of worksheets for just **\$19.95** per year!

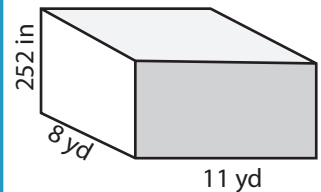
Members, please log in to download this worksheet.

Log in

Not a member? Please sign up to gain complete access.

Sign up

www.mathworksheets4kids.com



Volume = _____ yd³

10) A chocolate box has a length of 18 inches, a width of 7 inches and height of 1 foot. What is the volume of the chocolate box?

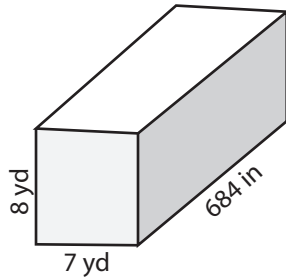
Volume = _____ in³

Volume - Rectangular Prism

CS3

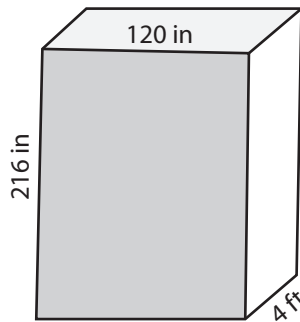
Find the volume of each rectangular prism.

1)



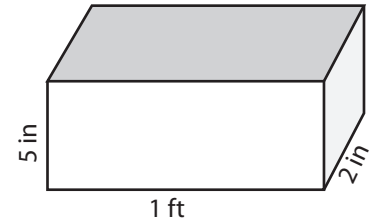
Volume = 1064 yd³

2)



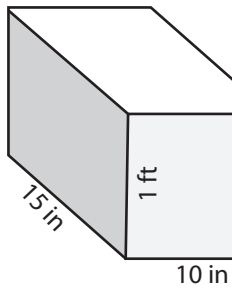
Volume = 720 ft³

3)



Volume = 120 in³

4)



Volume = 1800

PREVIEW

Access the largest collection of
worksheets for just **\$19.95** per year!

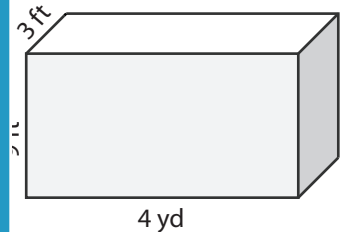
Members, please
log in to
download this
worksheet.

Log in

Not a member?
Please sign up to
gain complete
access.

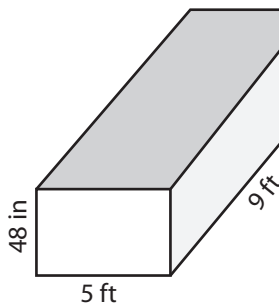
Sign up

www.mathworksheets4kids.com



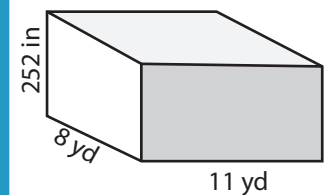
Volume = 324 ft³

7)



Volume = 180 ft³

Volume = 780 in³



Volume = 616 yd³

10) A chocolate box has a length of 18 inches, a width of 7 inches and height of 1 foot. What is the volume of the chocolate box?

Volume = 1512 in³