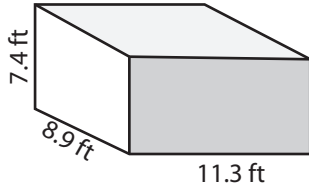


Volume - Rectangular Prism

DS3

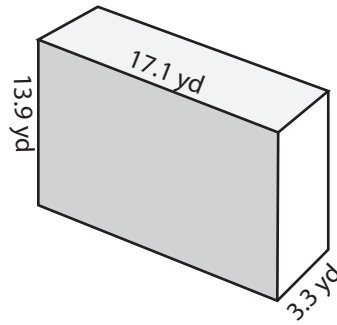
Find the volume of each rectangular prism. Round the answer to nearest tenth.

1)



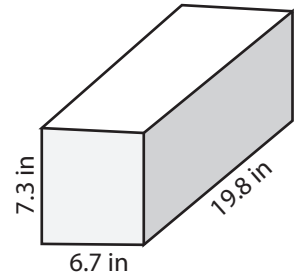
Volume = _____

2)



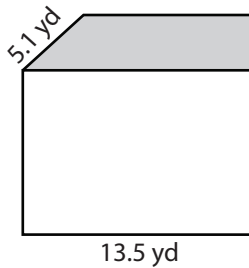
Volume = _____

3)




Volume = _____

4)

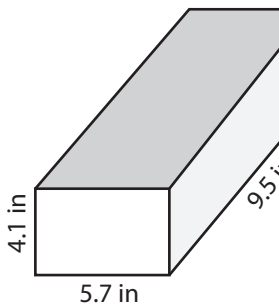


Volume = _____

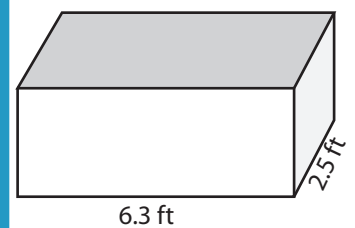
PREVIEWAccess the largest collection of
worksheets for just **\$19.95** per year!Members, please
log in to
download this
worksheet.**Log in**Not a member?
Please sign up to
gain complete
access.**Sign up**www.mathworksheets4kids.com

Volume = _____

7)



Volume = _____



Volume = _____

10) A book has a length of 15.3 yard, a width of 6.9 yard and a height of 2.9 yard.
What is the volume of the book?

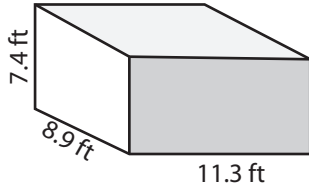
Volume = _____

Volume - Rectangular Prism

DS3

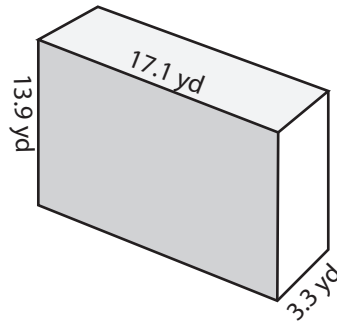
Find the volume of each rectangular prism. Round the answer to nearest tenth.

1)



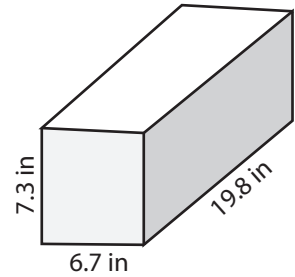
Volume = 744.2 ft³

2)



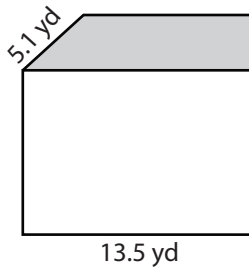
Volume = 784.4 yd³

3)

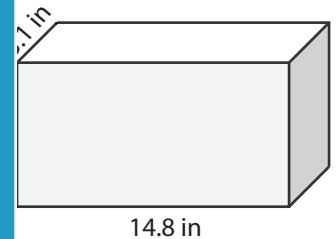


Volume = 968.4 in³

4)

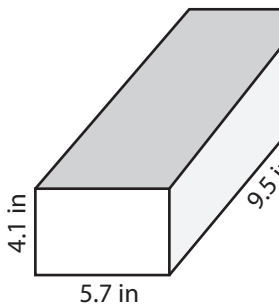


Volume = 702.3 yd³

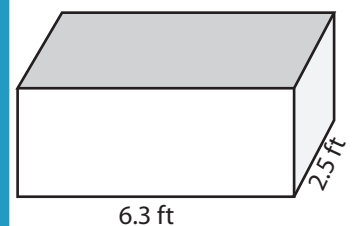
PREVIEWAccess the largest collection of
worksheets for just **\$19.95** per year!Members, please
log in to
download this
worksheet.**Log in**Not a member?
Please sign up to
gain complete
access.**Sign up**www.mathworksheets4kids.com

Volume = 426.7 in³

7)



Volume = 222 in³



Volume = 61.4 ft³

10) A book has a length of 15.3 yard, a width of 6.9 yard and a height of 2.9 yard.
What is the volume of the book?

Volume = 306.2 yd³