

Name : _____

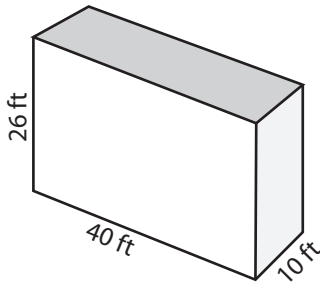
Score : _____

MS1

Volume - Rectangular Prism

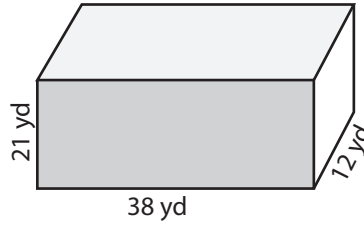
Find the volume of each rectangular prism.

1)



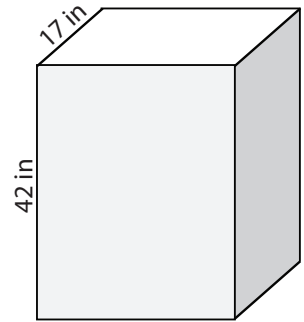
Volume = _____

2)



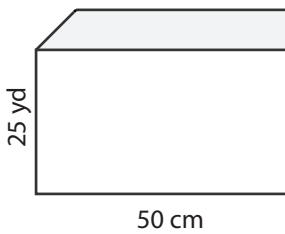
Volume = _____

3)



Volume = _____

4)



Volume = _____

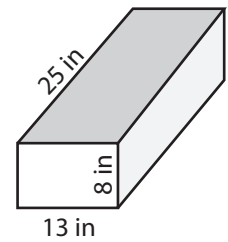
PREVIEW

Access the largest collection of
worksheets for just **\$19.95** per year!

Members, please
log in to
download this
worksheet.
Log in

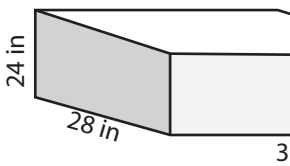
Not a member?
Please sign up to
gain complete
access.
Sign up

www.mathworksheets4kids.com

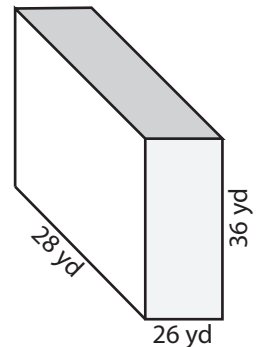


Volume = _____

7)



Volume = _____



Volume = _____

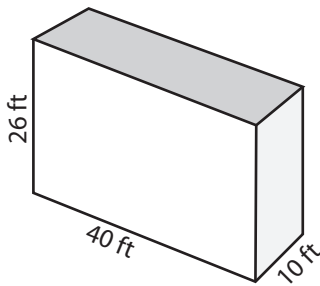
10) A cooler has a length of 25 inches, a width of 19 inches and a height of 15 inches. How much ice would the cooler hold?

Volume = _____

Volume - Rectangular Prism

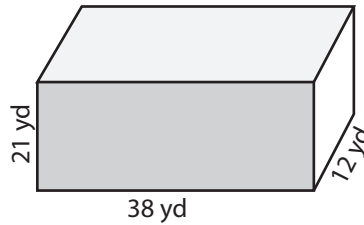
Find the volume of each rectangular prism.

1)



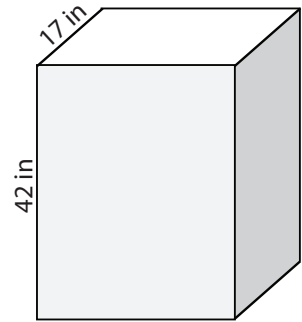
Volume = 10400 ft³

2)



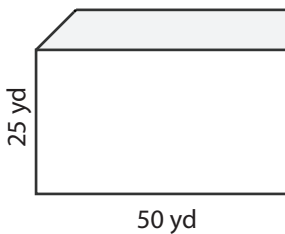
Volume = 9576 yd³

3)



Volume = 22134 in³

4)



Volume = 25000 yd³

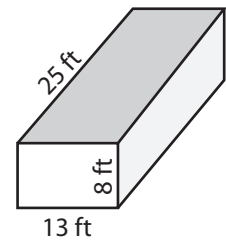
PREVIEW

Access the largest collection of
worksheets for just **\$19.95** per year!

Members, please
log in to
download this
worksheet.

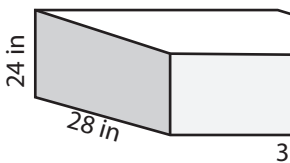
Log in

Not a member?
Please sign up to
gain complete
access.

Sign upwww.mathworksheets4kids.com

Volume = 2600 ft³

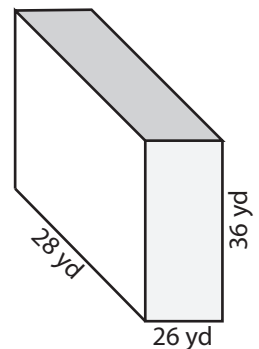
7)



Volume = 21504 in³

Volume = 50784 ft³

Volume = 26208 yd³



10) A cooler has a length of 25 inches, a width of 19 inches and a height of 15 inches. How much ice would the cooler hold?

Volume = 7125 in³