

Name : _____

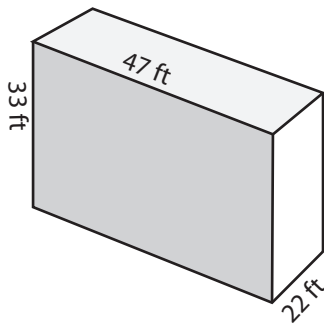
Score : _____

Volume - Rectangular Prism

MS3

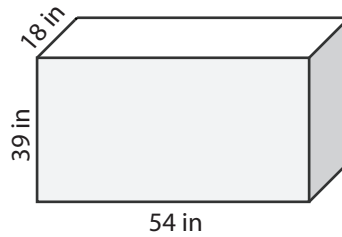
Find the volume of each rectangular prism.

1)



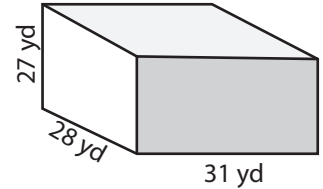
Volume = _____

2)



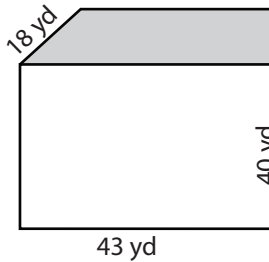
Volume = _____

3)

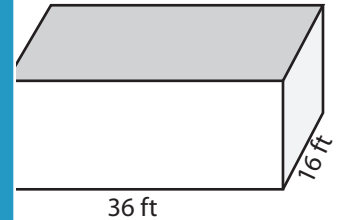


Volume = _____

4)

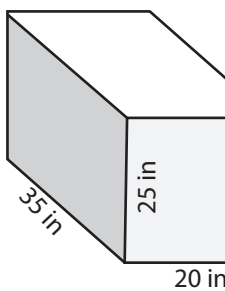


Volume = _____

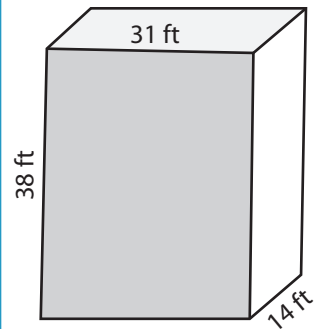


Volume = _____

7)



Volume = _____



Volume = _____

PREVIEW

Access the largest collection of worksheets for just **\$19.95** per year!

Members, please log in to download this worksheet. **Log in**

Not a member? Please sign up to gain complete access. **Sign up**

www.mathworksheets4kids.com

10) If the box of cotton has a length of 44 yard, a width of 30 yard and a height of 33 yard, what will be the volume of the cotton box?

Volume = _____

Name : _____

Answer Key

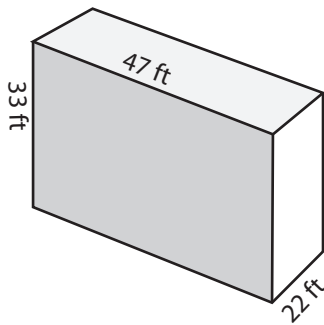
Score : _____

Volume - Rectangular Prism

MS3

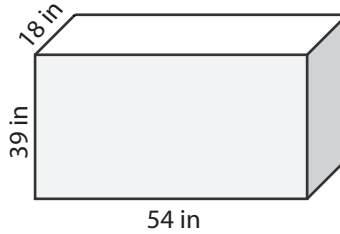
Find the volume of each rectangular prism.

1)



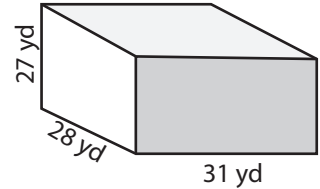
Volume = 34122 ft³

2)



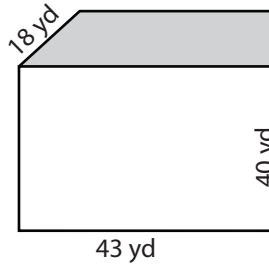
Volume = 37908 in³

3)

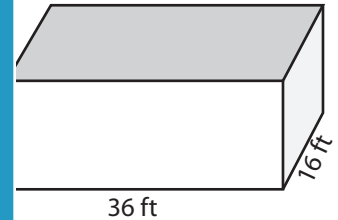


Volume = 23436 yd³

4)

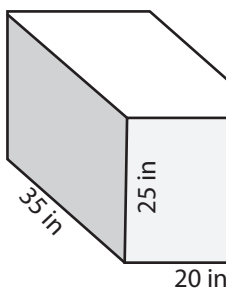


Volume = 30960 yd³



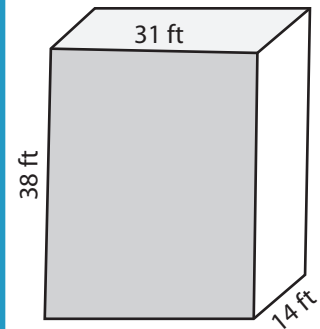
Volume = 12672 ft³

7)



Volume = 17500 in³

Volume = 7888 yd³



Volume = 16492 ft³

PREVIEW

Access the largest collection of worksheets for just **\$19.95** per year!

Members, please log in to download this worksheet. **Log in**

Not a member? Please sign up to gain complete access. **Sign up**

www.mathworksheets4kids.com

10) If the box of cotton has a length of 44 yard, a width of 30 yard and a height of 33 yard, what will be the volume of the cotton box?

Volume = 43560 yd³