


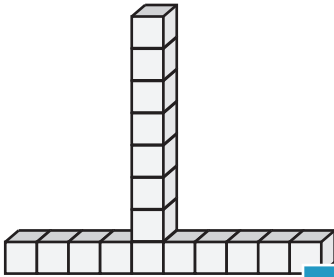
Counting Cubes

ES2

 = 1 yd³

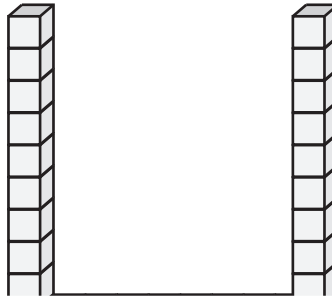
Count the cubes and find the volume of each block.

1)



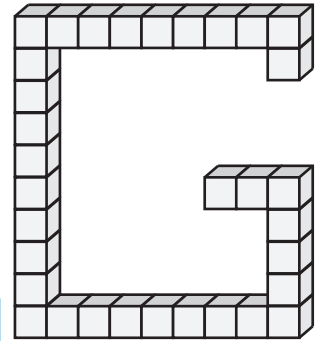
Volume = _____

2)



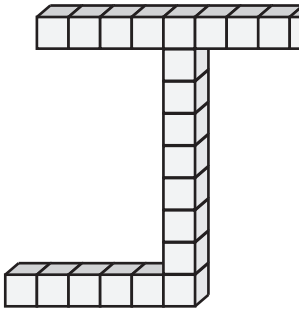
Volume = _____

3)



Volume = _____

4)



Volume = _____

Access the largest collection of worksheets for just **\$19.95** per year!

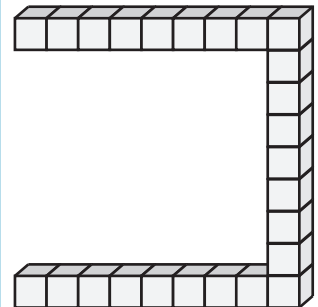
Members, please log in to download this worksheet.

Log in

Not a member? Please sign up to gain complete access.


Sign up

www.mathworksheets4kids.com

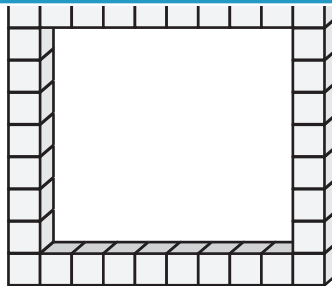


Volume = _____

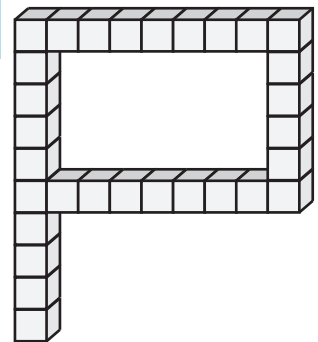
7)



Volume = _____



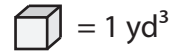
Volume = _____



Volume = _____

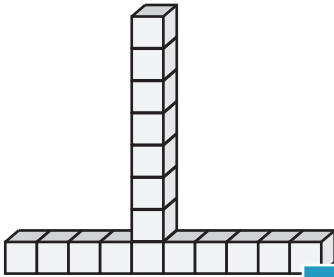
Answer Key**Counting Cubes**

ES2

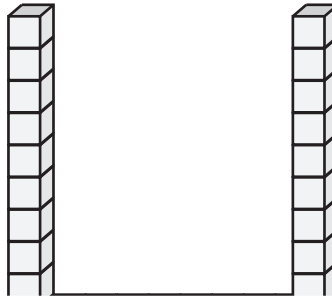


Count the cubes and find the volume of each block.

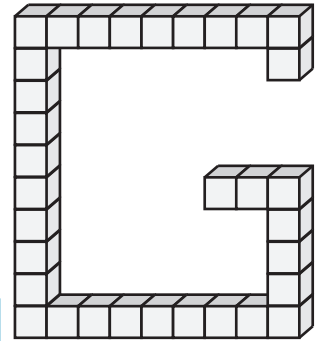
1)

Volume = 17 yd³

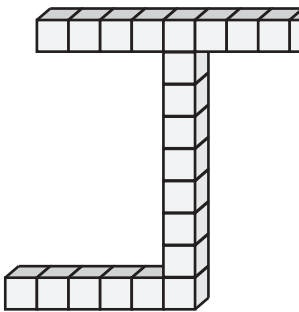
2)



3)

Volume = 33 yd³

4)

Volume = 22 yd³

PREVIEW

Access the largest collection of worksheets for just **\$19.95** per year!

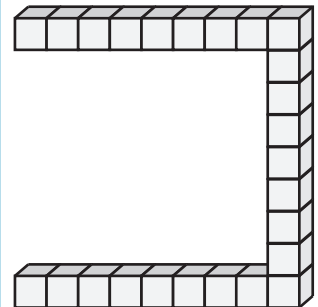
Members, please log in to download this worksheet.

Log in


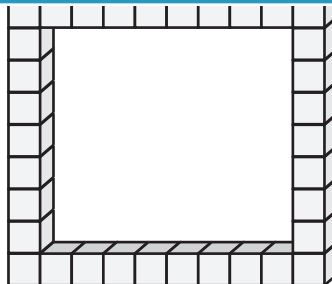
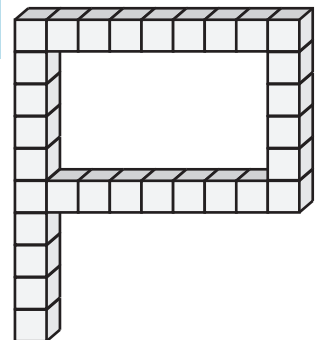
Not a member? Please sign up to gain complete access.

Sign up

www.mathworksheets4kids.com

Volume = 25 yd³

7)

Volume = 19 yd³Volume = 34 yd³Volume = 30 yd³