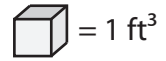


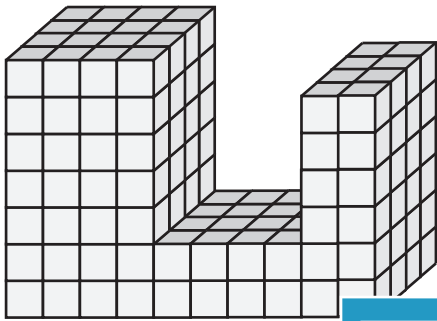
Counting Cubes

DS1

Count the cubes and find the volume of each block.

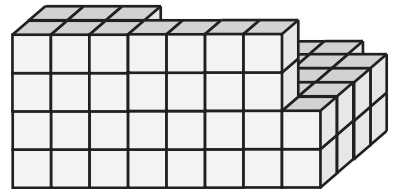
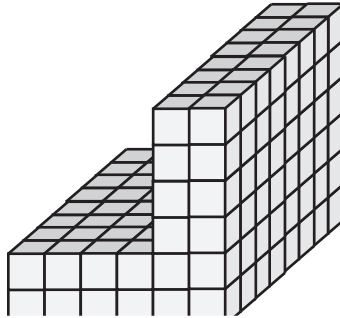


1)



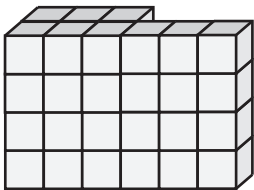
Volume = _____

2)



Volume = _____

4)



Volume = _____

PREVIEW

Access the largest collection of
worksheets for just **\$19.95** per year!


Members, please
log in to
download this
worksheet.

Log in

Not a member?
Please sign up to
gain complete
access.


Sign up

www.mathworksheets4kids.com

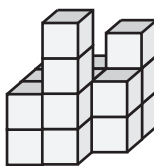


Volume = _____

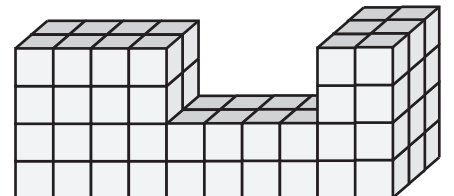
7)



Volume = _____



Volume = _____

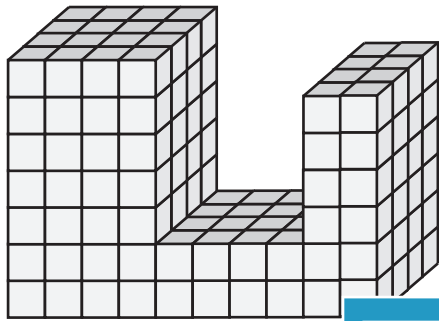


Volume = _____

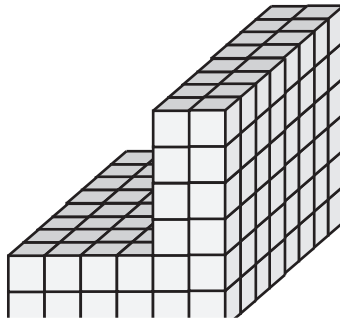
Count the cubes and find the volume of each block.



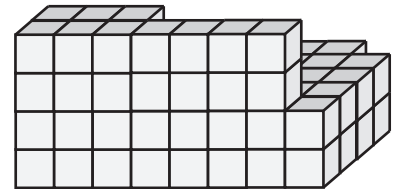
1)



2)



3)



Volume = 192 ft³

Volume = 95 ft³

PREVIEW

Access the largest collection of worksheets for just **\$19.95** per year!

Members, please log in to download this worksheet.


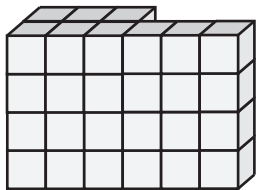
Not a member? Please sign up to gain complete access.

Log in

Sign up

www.mathworksheets4kids.com

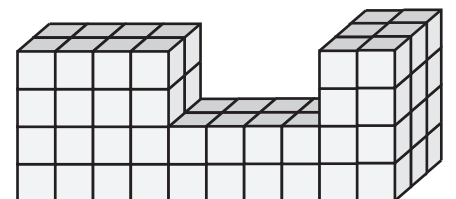
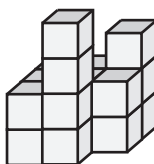

4)



Volume = 36 ft³

Volume = 90 ft³

7)



Volume = 54 ft³

Volume = 19 ft³

Volume = 72 ft³