



Counting Cubes

DS2

Count the cubes and find the volume of each block.

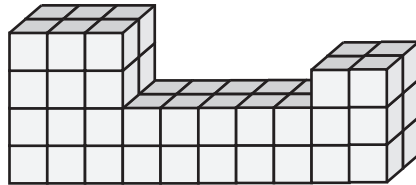
 = 1 yd³

1)



Volume = _____

2)



PREVIEW

Access the largest collection of worksheets for just **\$19.95** per year!

Members, please log in to download this worksheet.

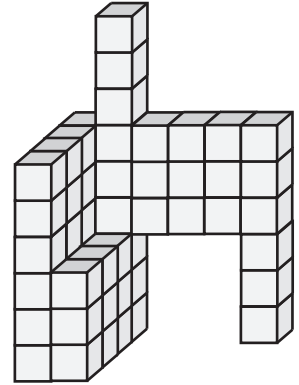
Log in

Not a member? Please sign up to gain complete access.

Sign up


www.mathworksheets4kids.com

3)

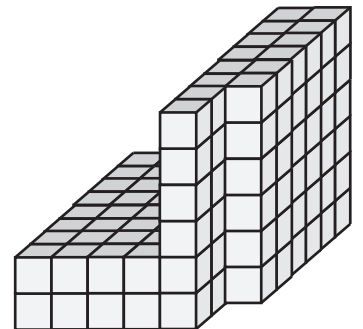


Volume = _____

4)

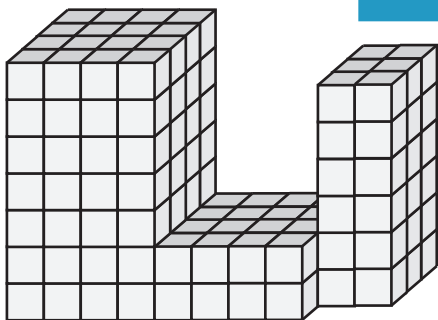


Volume = _____

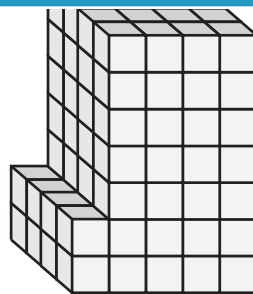


Volume = _____

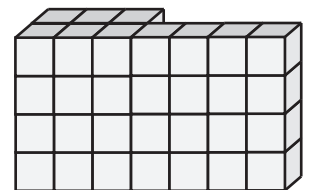
7)



Volume = _____




Volume = _____




Volume = _____

Count the cubes and find the volume of each block.

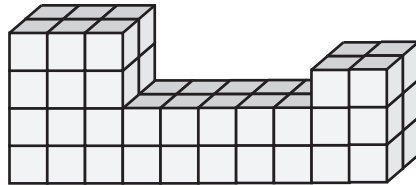
 = 1 yd³

1)

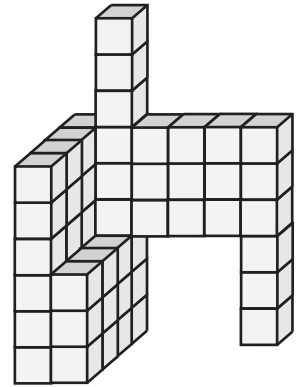


Volume = 58 yd³

2)

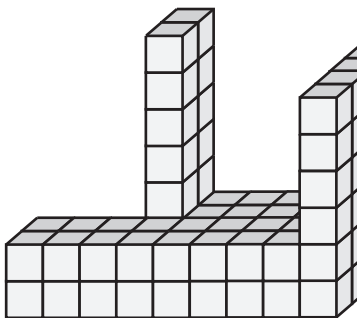


3)



Volume = 57 yd³

4)



Volume = 78 yd³

PREVIEW

Access the largest collection of worksheets for just **\$19.95** per year!

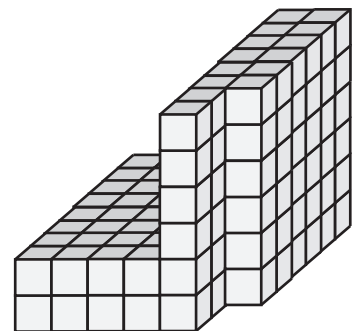
Members, please log in to download this worksheet.

Log in

Not a member? Please sign up to gain complete access.

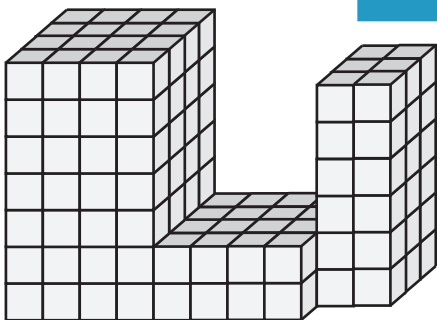
Sign up

www.mathworksheets4kids.com

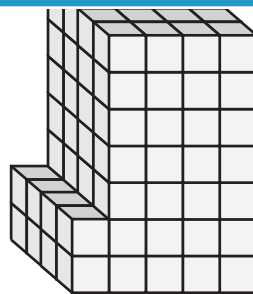


Volume = 148 yd³

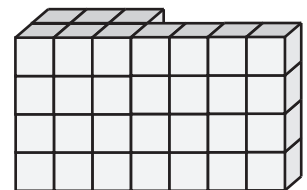
7)



Volume = 180 yd³



Volume = 120 yd³



Volume = 40 yd³