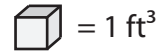


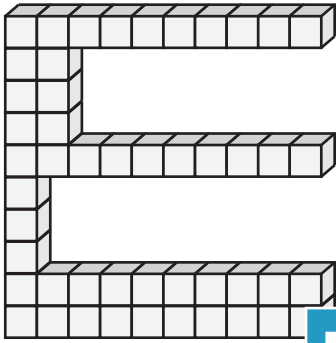
Counting Cubes

MS1



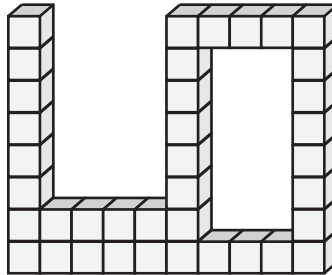
Count the cubes and find the volume of each block.

1)

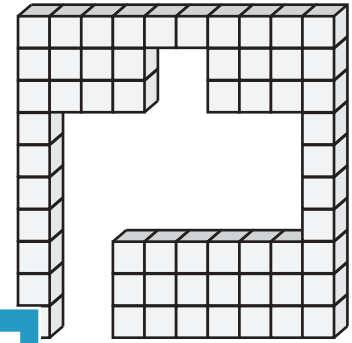


Volume = _____

2)




3)

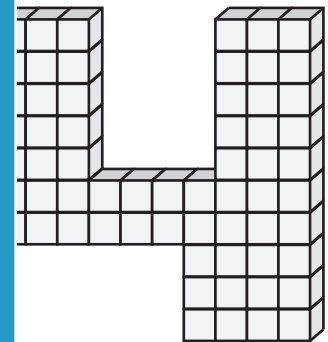


Volume = _____

4)




Volume = _____

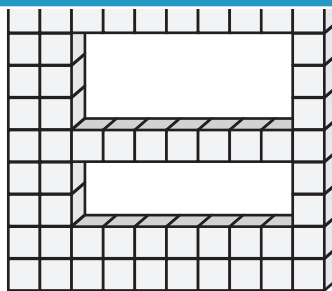


Volume = _____

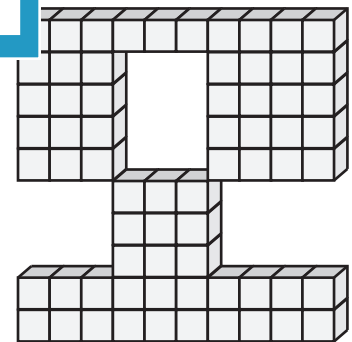
7)



Volume = _____



Volume = _____



Volume = _____

PREVIEW

Access the largest collection of worksheets for just **\$19.95** per year!

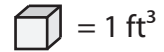
Members, please log in to download this worksheet.

Log in

Not a member? Please sign up to gain complete access.

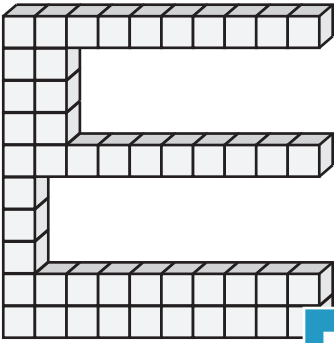
Sign up

www.mathworksheets4kids.com



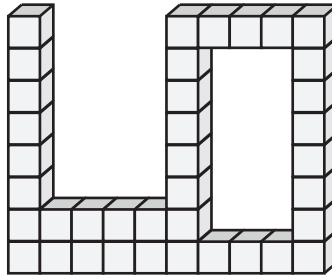
Count the cubes and find the volume of each block.

1)



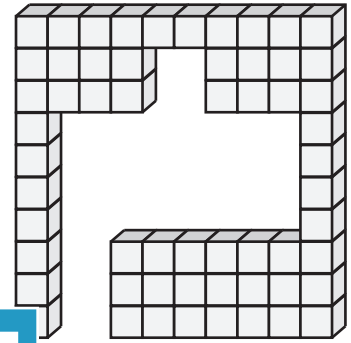
Volume = 49 ft³

2)




Volume = 58 ft³

3)



4)



Volume = 47 ft³

Access the largest collection of
worksheets for just **\$19.95** per year!

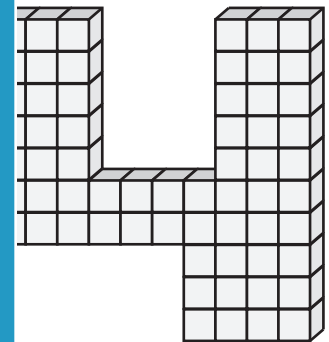
Members, please
log in to
download this
worksheet.

Log in

Not a member?
Please sign up to
gain complete
access.


Sign up

www.mathworksheets4kids.com

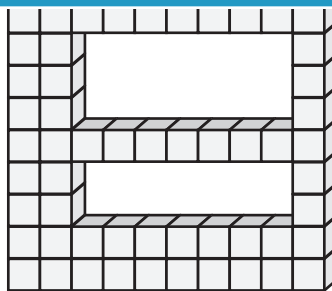


Volume = 62 ft³


7)



Volume = 54 ft³



Volume = 65 ft³



Volume = 67 ft³