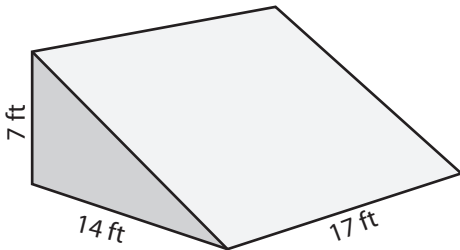


**Volume of Triangular Prism**

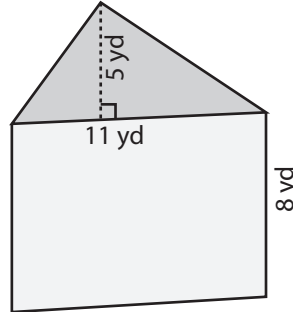
Find the volume of each triangular prism.

1)

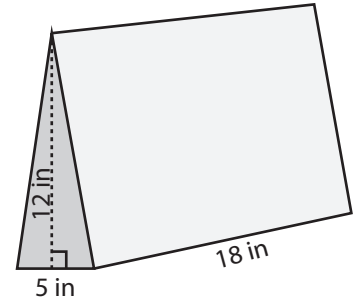


Volume = \_\_\_\_\_

2)

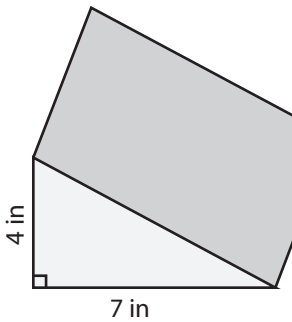


3)

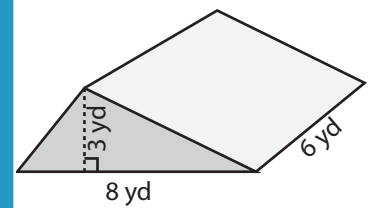


me = \_\_\_\_\_

4)

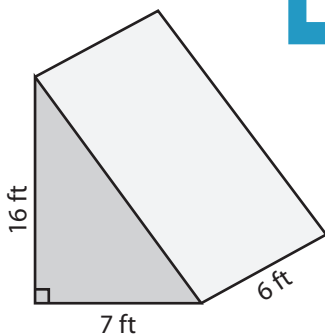


Volume = \_\_\_\_\_

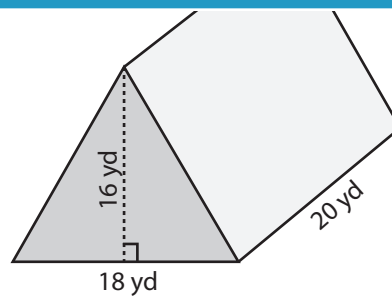


me = \_\_\_\_\_

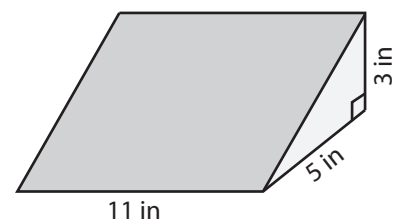
7)



Volume = \_\_\_\_\_



Volume = \_\_\_\_\_



Volume = \_\_\_\_\_

# PREVIEW

Access the largest collection of  
worksheets for just **\$19.95** per year!

Members, please  
log in to  
download this  
worksheet.

**Log in**

Not a member?  
Please sign up to  
gain complete  
access.

**Sign up**

[www.mathworksheets4kids.com](http://www.mathworksheets4kids.com)

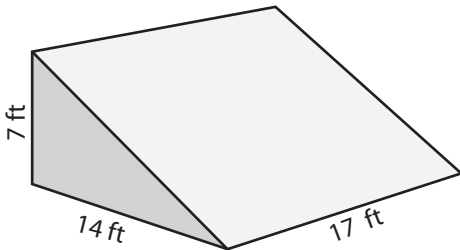
**Answer Key**

**Volume of Triangular Prism**

ES2

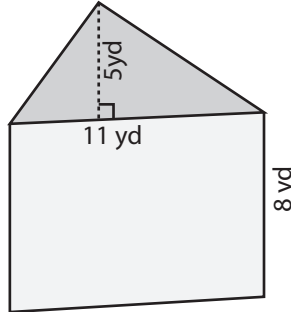
Find the volume of each triangular prism.

1)

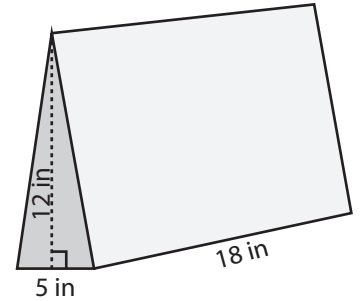


Volume = 833 ft<sup>3</sup>

2)

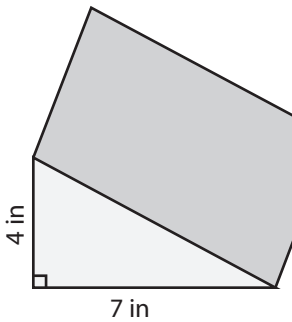


3)



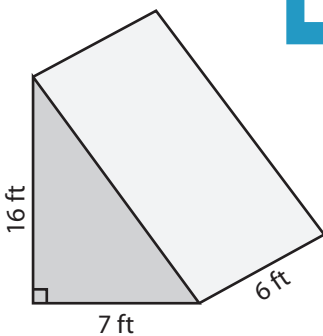
Volume = 540 in<sup>3</sup>

4)

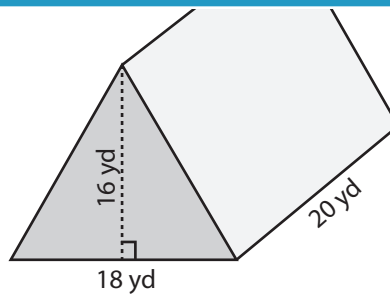


Volume = 70 in<sup>3</sup>

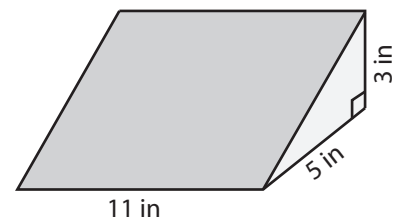
7)



Volume = 336 ft<sup>3</sup>



Volume = 2880 yd<sup>3</sup>



Volume = 82.5 in<sup>3</sup>

**PREVIEW**

Access the largest collection of  
worksheets for just **\$19.95** per year!

Members, please  
log in to  
download this  
worksheet.

Log in

Not a member?  
Please sign up to  
gain complete  
access.

Sign up

[www.mathworksheets4kids.com](http://www.mathworksheets4kids.com)