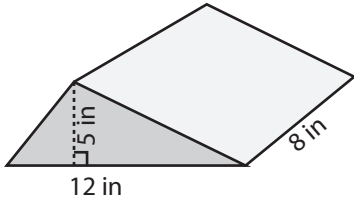


**Volume of Triangular Prism**

ES3

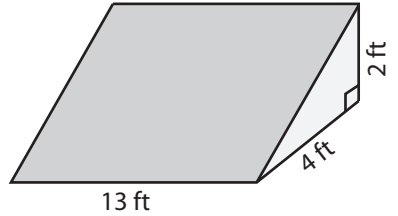
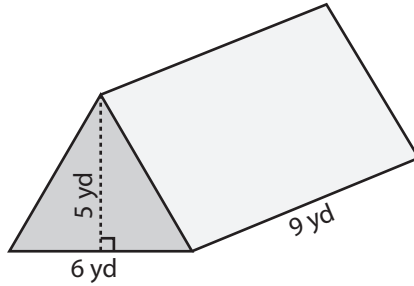
Find the volume of each triangular prism.

1)



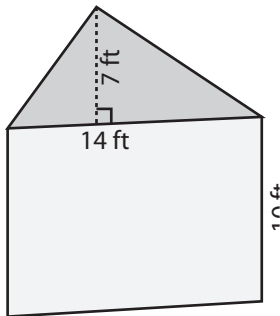
Volume = \_\_\_\_\_

2)

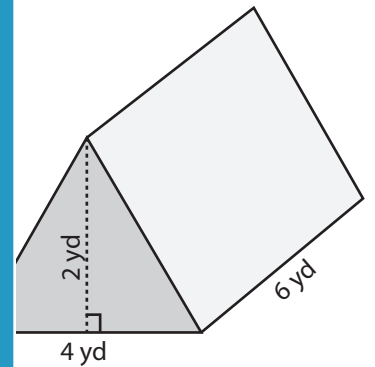


me = \_\_\_\_\_

4)

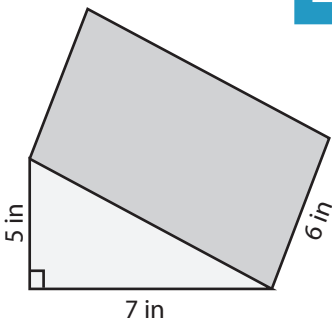


Volume = \_\_\_\_\_

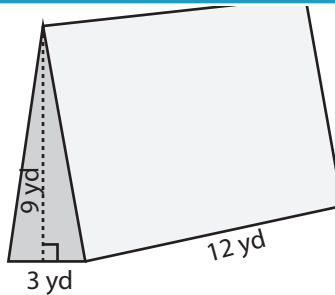


me = \_\_\_\_\_

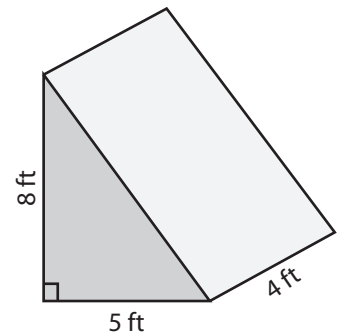
7)



Volume = \_\_\_\_\_



Volume = \_\_\_\_\_



Volume = \_\_\_\_\_

# PREVIEW

Access the largest collection of  
worksheets for just **\$19.95** per year!

Members, please  
log in to  
download this  
worksheet.

Log in

Not a member?  
Please sign up to  
gain complete  
access.

Sign up

www.mathworksheets4kids.com

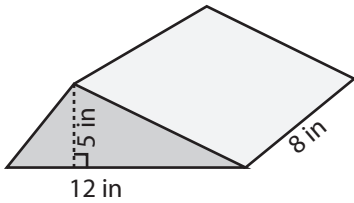
**Answer Key**

**Volume of Triangular Prism**

ES3

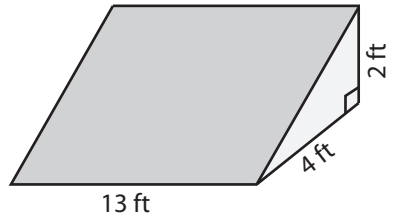
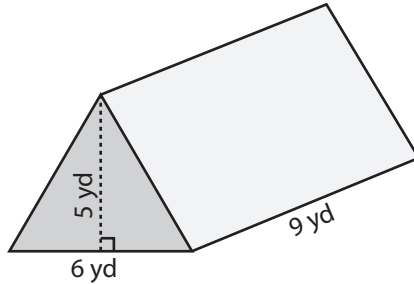
Find the volume of each triangular prism.

1)



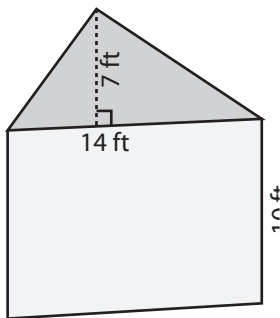
Volume = 240 in<sup>3</sup>

2)

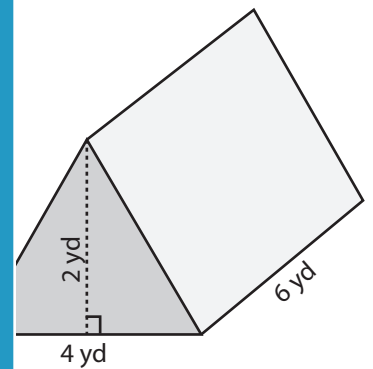


Volume = 52 ft<sup>3</sup>

4)

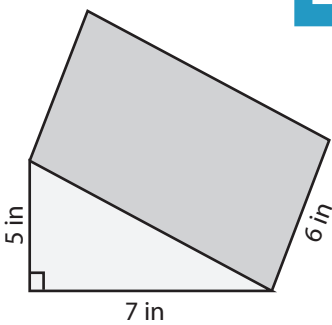


Volume = 490 ft<sup>3</sup>

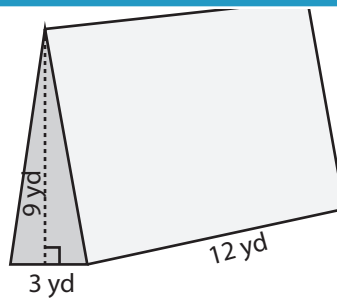


Volume = 24 yd<sup>3</sup>

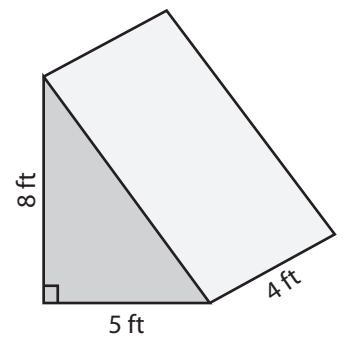
7)



Volume = 105 in<sup>3</sup>



Volume = 162 yd<sup>3</sup>



Volume = 80 ft<sup>3</sup>

**PREVIEW**

Access the largest collection of worksheets for just **\$19.95** per year!

Members, please log in to download this worksheet.

Log in

Not a member? Please sign up to gain complete access.

Sign up

[www.mathworksheets4kids.com](http://www.mathworksheets4kids.com)