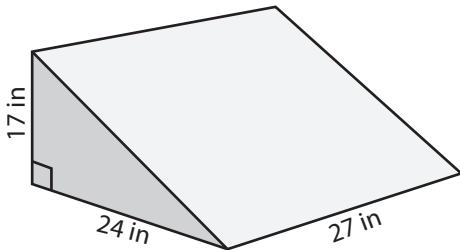


Volume of Triangular Prism

MS3

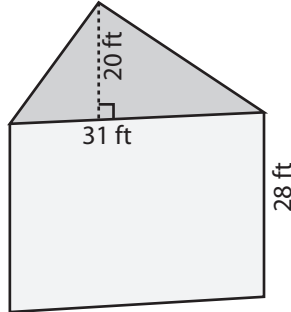
Find the volume of each triangular prism.

1)



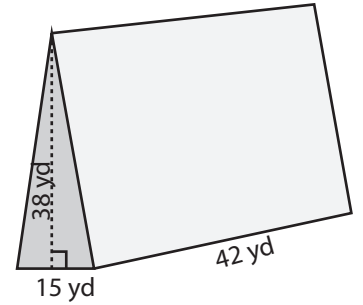
Volume = _____

2)

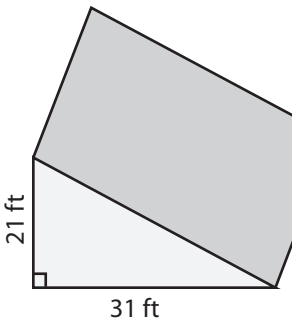


me = _____

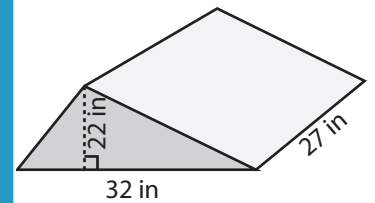
3)



4)

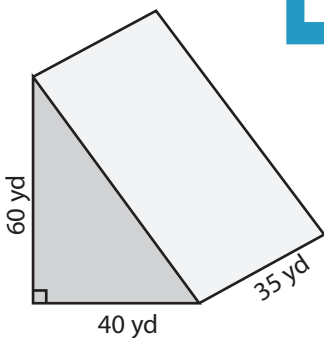


Volume = _____

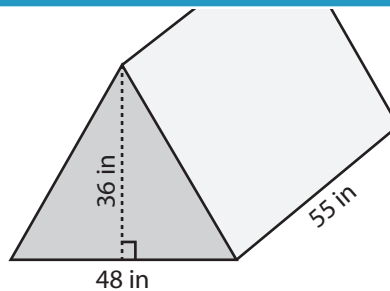


me = _____

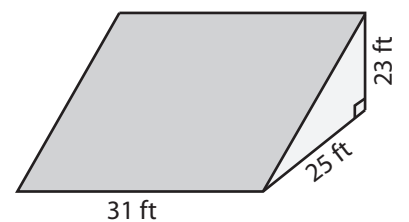
7)



Volume = _____



Volume = _____



Volume = _____

PREVIEW

Access the largest collection of
worksheets for just **\$19.95** per year!

Members, please
log in to
download this
worksheet.

Log in

Not a member?
Please sign up to
gain complete
access.

Sign up

www.mathworksheets4kids.com

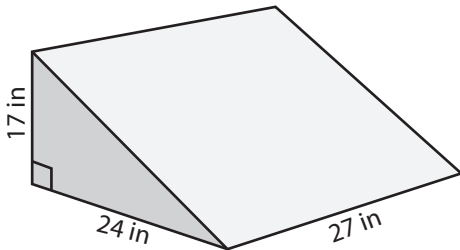
Answer Key

Volume of Triangular Prism

MS3

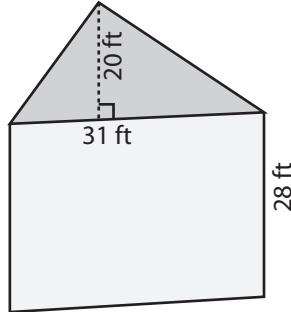
Find the volume of each triangular prism.

1)

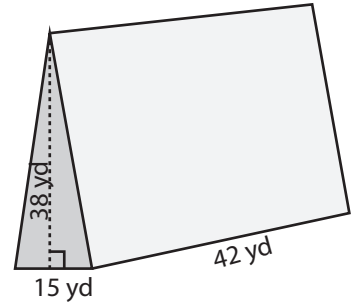


Volume = 5508 in³

2)

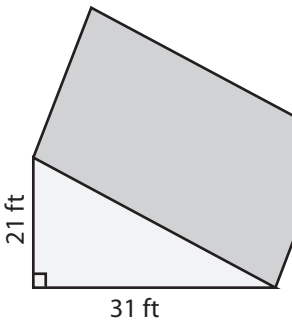


3)

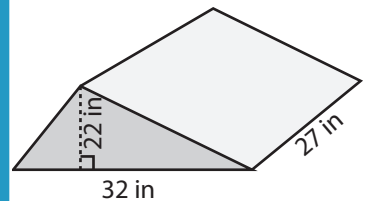


Volume = 11970 yd³

4)

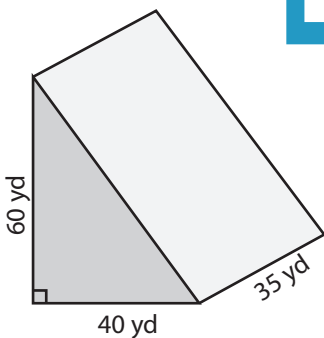


Volume = 8788.5 ft³

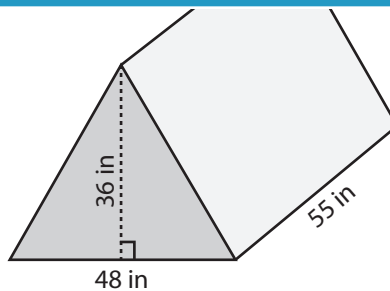


Volume = 9504 in³

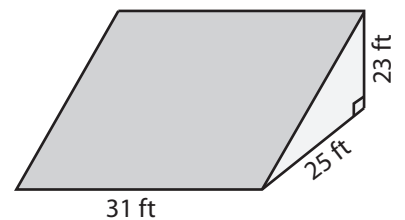
7)



Volume = 42000 yd³



Volume = 47520 in³



Volume = 8912.5 ft³

PREVIEW

Access the largest collection of worksheets for just **\$19.95** per year!

Members, please log in to download this worksheet.

Log in

Not a member? Please sign up to gain complete access.

Sign up

www.mathworksheets4kids.com