

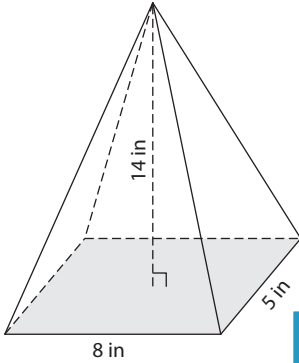
Name : \_\_\_\_\_

## Volume - Pyramids

Mixed Review: L1ES1

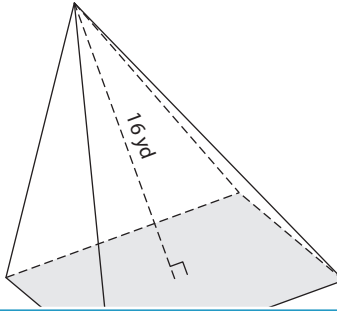
Find the volume of each pyramid. Round your answer to two decimal places.

1)

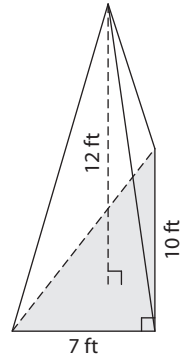


Volume = \_\_\_\_\_

2)

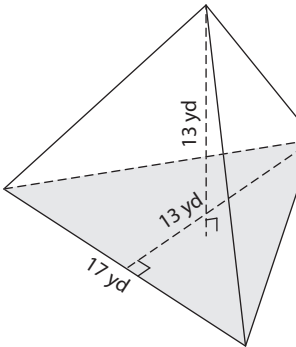


3)



Volume = \_\_\_\_\_

4)



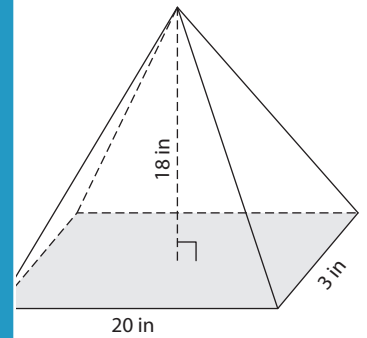
Volume = \_\_\_\_\_

Gain complete access to the largest collection of worksheets in all subjects!

Members, please log in to download this worksheet.

Not a member? Please sign up to gain complete access.

[www.mathworksheets4kids.com](http://www.mathworksheets4kids.com)



Volume = \_\_\_\_\_

7) A rectangular pyramid has a base length of 12 inches and a base width of 6 inches. Determine the volume of the pyramid.

8) A rectangular pyramid has a base length of 10 inches and a base width of 6 inches. Determine the volume of the pyramid.

\_\_\_\_\_

8) The base of a pyramid is a triangle whose base is 7 yards and height is 14 yards. Find the volume of the pyramid, if its height is 11 yards. Round your answer to two decimal places.

\_\_\_\_\_

Name : \_\_\_\_\_

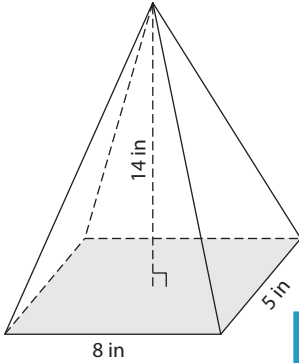
## Answer key

# Volume - Pyramids

Mixed Review: L1ES1

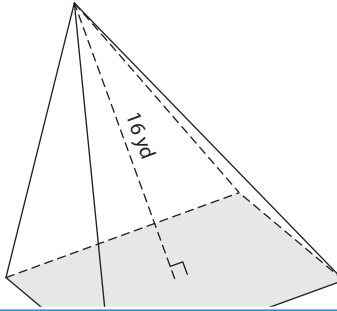
Find the volume of each pyramid. Round your answer to two decimal places.

1)

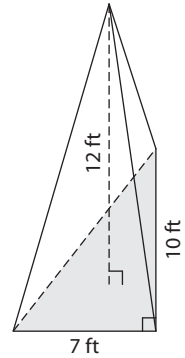


Volume = 186.67 in<sup>3</sup>

2)

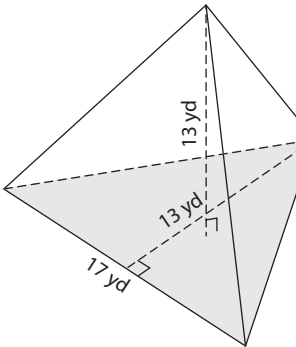


3)



Volume = 140 ft<sup>3</sup>

4)



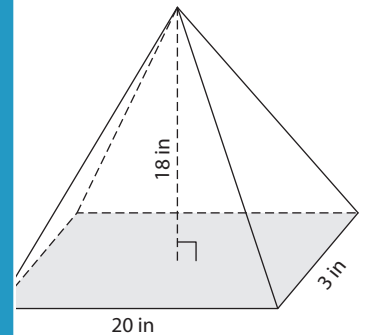
Volume = 478.83 yd<sup>3</sup>

Gain complete access to the largest collection of worksheets in all subjects!

Members, please log in to download this worksheet.

Not a member? Please sign up to gain complete access.

[www.mathworksheets4kids.com](http://www.mathworksheets4kids.com)



Volume = 360 in<sup>3</sup>

7) A rectangular pyramid has a height of 6 inches. Determine the volume of the pyramid.

height of 6 inches. Determine the volume of the pyramid.

560 cubic inches

8) The base of a pyramid is a triangle whose base is 7 yards and height is 14 yards. Find the volume of the pyramid, if its height is 11 yards. Round your answer to two decimal places.

179.67 cubic yards