

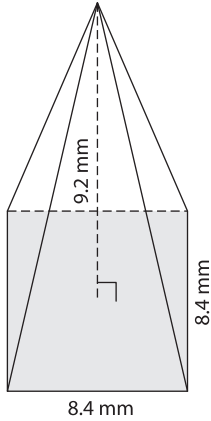
Name : _____

Volume - Pyramids

Mixed Review: L2S1

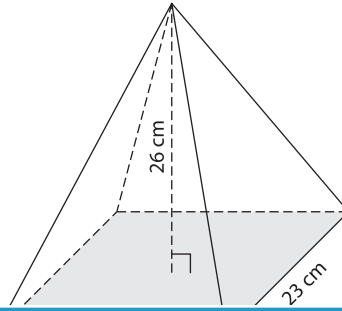
A) Find the volume of each pyramid. Round your answer to two decimal places.

1)

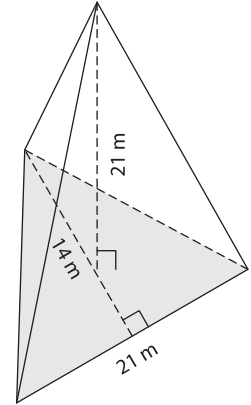


Volume = _____

2)



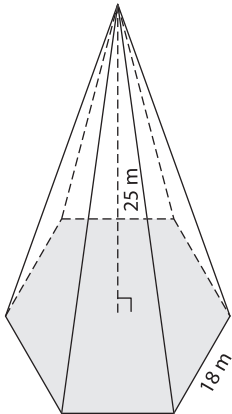
3)



Volume = _____

B) Find the volume of each

4)



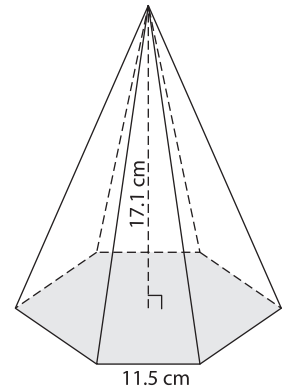
Volume = _____

Gain complete access to the largest
collection of worksheets in all subjects!

Members, please
log in to
download this
worksheet.

Not a member?
Please sign up to
gain complete
access.

www.mathworksheets4kids.com



Volume = _____

7) The base of a pyramid is a triangle whose base is 13 cm and height is 25 cm. Find the volume of the pyramid, if its height is 5 cm. Round your answer to two decimal places.
