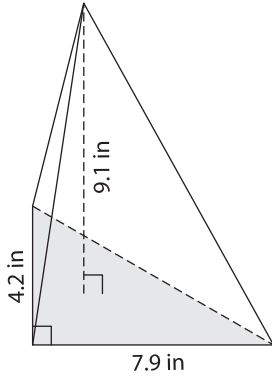


Name : _____

Volume - Cones and Pyramids

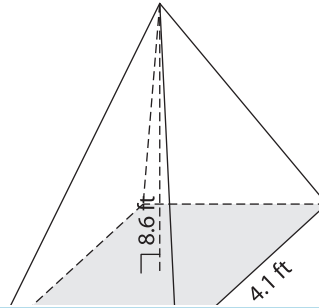
Find the volume of each shape. Round your answer to two decimal places. (use $\pi = 3.14$)

1)

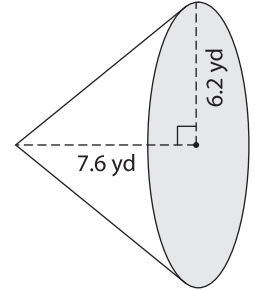


Volume = _____

2)

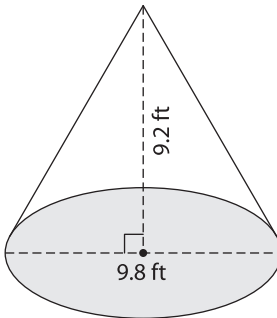


3)



Volume = _____

4)



Volume = _____

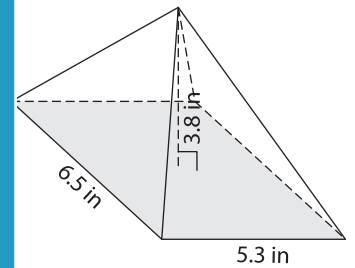
PREVIEW

Gain complete access to the largest collection of worksheets in all subjects!

Members, please log in to download this worksheet.

Not a member? Please sign up to gain complete access.

www.mathworksheets4kids.com



Volume = _____

7) The diameter of a cone is _____
Find its volume. Round your answer to two decimal places.

8) The length, height and width of a rectangular pyramid are 1.6 inches, 7 inches and 2.5 inches respectively. What is the volume of the pyramid? Round your answer to two decimal places.
