

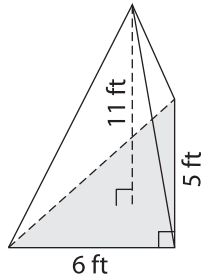
Name : _____

Integers: S2

Volume - Cones and Pyramids

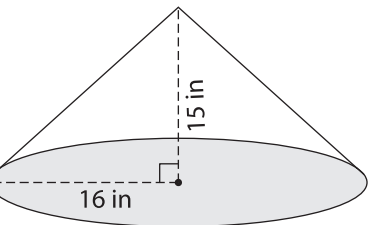
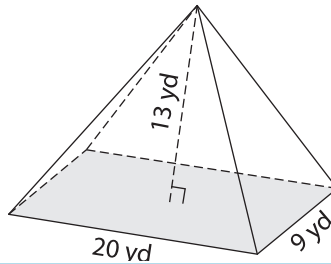
Find the volume of each shape. Round your answer to two decimal places. (use $\pi = 3.14$)

1)



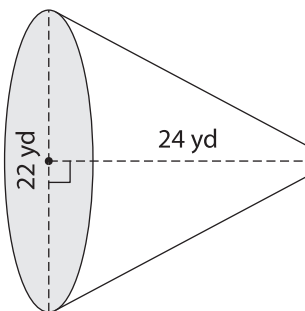
Volume = _____

2)



Volume = _____

4)



Volume = _____

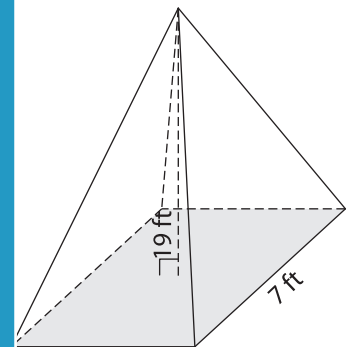
PREVIEW

Gain complete access to the largest collection of worksheets in all subjects!

Members, please log in to download this worksheet.

Not a member? Please sign up to gain complete access.

www.mathworksheets4kids.com



Volume = _____

7) The diameter of a cone is _____ inches. Round your answer to two decimal places.

_____ inches. Round your answer to two decimal places.

8) What is the volume of a rectangular pyramid whose length is 14 feet, height is 4 feet and width is 12 feet?