

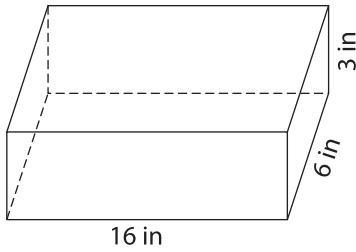
Name : \_\_\_\_\_

## Volume - Mixed Shapes

Integers: L1S1

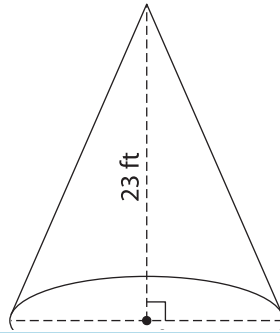
Find the volume of each shape. Round your answer to two decimal places. (use  $\pi = 3.14$ )

1)

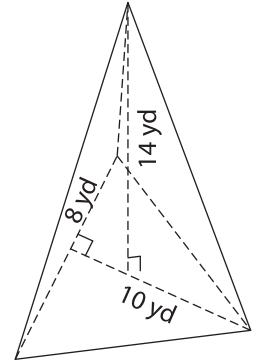


Volume = \_\_\_\_\_

2)

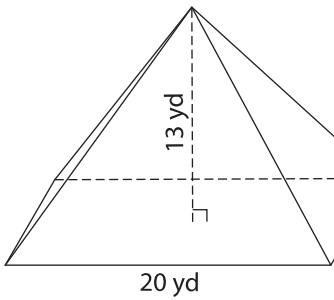


3)



Volume = \_\_\_\_\_

4)



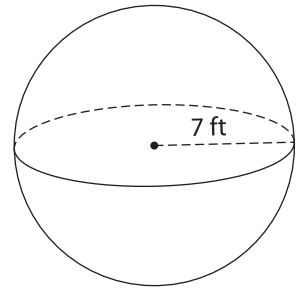
Volume = \_\_\_\_\_

Gain complete access to the largest collection of worksheets in all subjects!

Members, please log in to download this worksheet.

Not a member? Please sign up to gain complete access.

[www.mathworksheets4kids.com](http://www.mathworksheets4kids.com)



Volume = \_\_\_\_\_

7) Find the volume of a hemisphere (use  $\pi = 3.14$ )

Answer to two decimal places.

\_\_\_\_\_

8) The base of a prism is a right triangle with legs measuring 11 yards and 17 yards. Determine the volume of the prism, if its height is 12 yards.

\_\_\_\_\_