

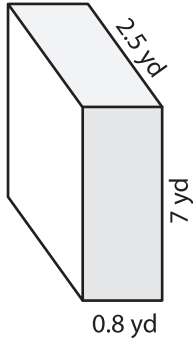
Name : _____

Volume - Prisms and Cylinders

Decimals: L1S1

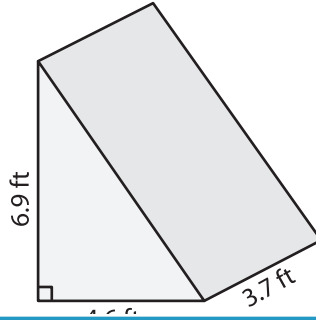
Find the volume of each shape. Round your answer to two decimal places. (use $\pi = 3.14$)

1)

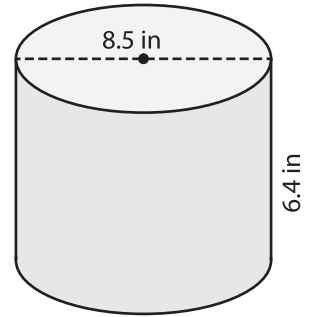


Volume = _____

2)

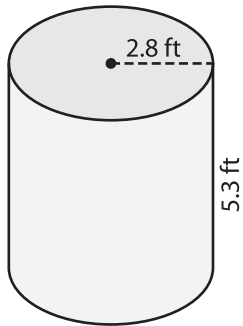


3)



Volume = _____

4)



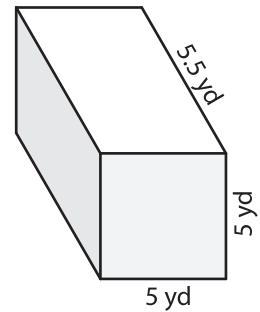
Volume = _____

PREVIEW
Gain complete access to the largest collection of worksheets in all subjects!

Members, please log in to download this worksheet.

Not a member? Please sign up to gain complete access.

www.mathworksheets4kids.com



Volume = _____

7) The base of a prism is a triangle with a base of 1.3 feet, find its volume. Round your answer to two decimal places.

If the height of the prism is _____

8) The diameter of a cylinder is 4.2 inches. If the height of the cylinder is 2.9 inches, determine its volume. Round your answer to two decimal places. (use $\pi = 3.14$)
