

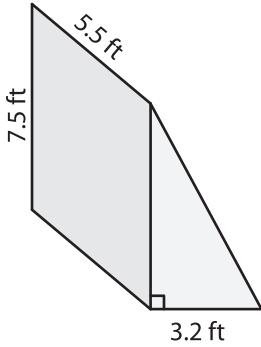
Name : _____

Volume - Prisms and Cylinders

Decimals: L1S3

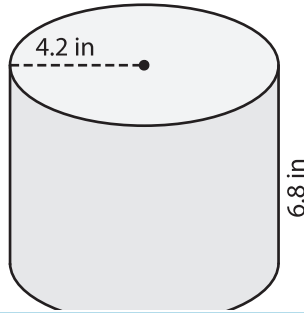
Find the volume of each shape. Round your answer to two decimal places. (use $\pi = 3.14$)

1)



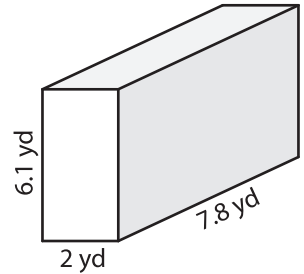
Volume = _____

2)

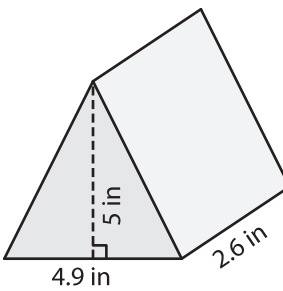


Volume = _____

3)



4)



Volume = _____

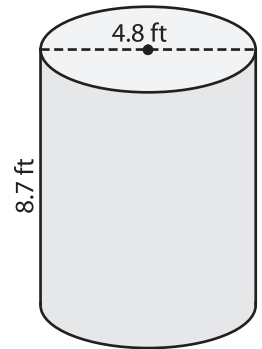
PREVIEW

Gain complete access to the largest collection of worksheets in all subjects!

Members, please log in to download this worksheet.

Not a member? Please sign up to gain complete access.

www.mathworksheets4kids.com



Volume = _____

7) The radius and height of a cylinder? Round your answer to two decimal places.

What is the volume of the

8) The height of a square prism is 7.3 yards. If the sidelength of the base square is 5.1 yards, determine the volume of the prism. Round your answer to two decimal places.
