

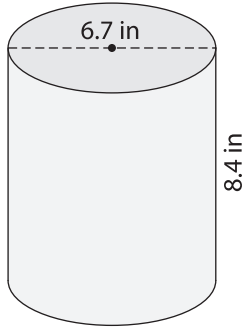
Name : _____

Decimals: L2S1

Volume - Prisms and Cylinders

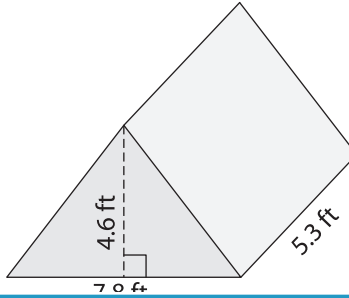
Find the volume of each shape. Round your answer to two decimal places. (use $\pi = 3.14$)

1)

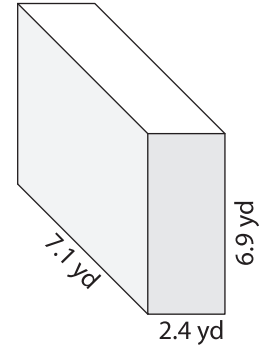


Volume = _____

2)

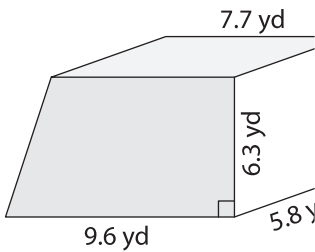


3)



Volume = _____

4)



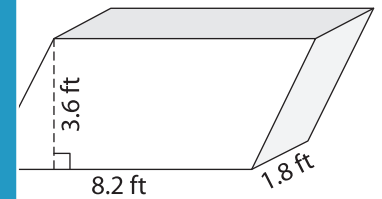
Volume = _____

PREVIEW
Gain complete access to the largest collection of worksheets in all subjects!

Members, please log in to download this worksheet.

Not a member? Please sign up to gain complete access.

www.mathworksheets4kids.com



Volume = _____

7) The height of a cylinder is _____ and its radius is _____.
Find its volume. Round your answer to two decimal places.

_____ find its volume. Round your answer to two decimal places.

8) The base of a prism is a triangle with a base of 4.3 yards and a height of 2.7 yards. Determine the volume of the prism, if its height is 6.1 yards. Round your answer to two decimal places.