

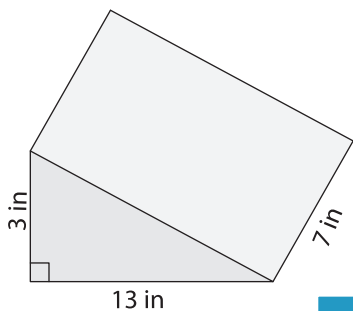
Name : _____

Volume - Prisms and Cylinders

Integers: L2S2

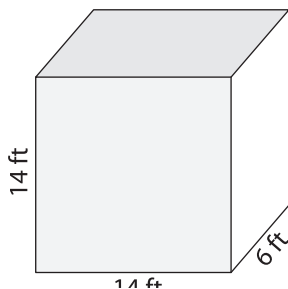
Find the volume of each shape. Round your answer to two decimal places. (use $\pi = 3.14$)

1)

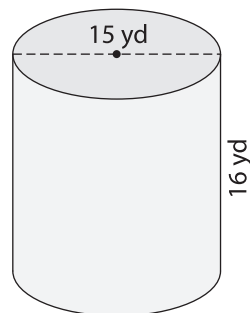


Volume = _____

2)

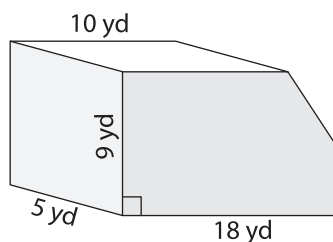


3)



Volume = _____

4)



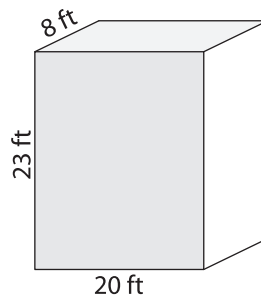
Volume = _____

PREVIEW
Gain complete access to the largest collection of worksheets in all subjects!

Members, please log in to download this worksheet.

Not a member? Please sign up to gain complete access.

www.mathworksheets4kids.com



Volume = _____

7) The base of a prism is a trapezoid with parallel bases of 25 yards and 17 yards. Find the volume of the prism if its height is 10 yards.

_____ of the trapezoid measure

8) The base of a prism is a right triangle with legs measuring 7 feet and 3 feet. Determine the volume of the prism, if its height is 24 feet.