

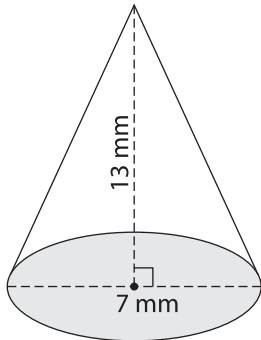
Name : _____

Volume - Cones and Pyramids

Integers: S1

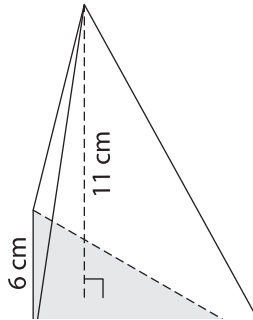
Find the volume of each shape. Round your answer to two decimal places. (use $\pi = 3.14$)

1)

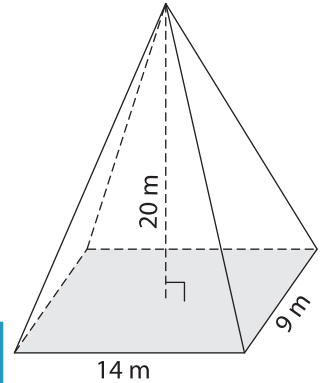


Volume = _____

2)

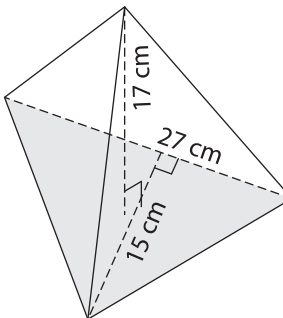


3)



Volume = _____

4)



Volume = _____

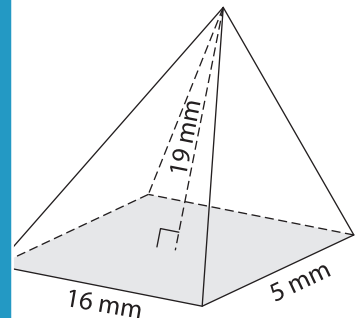
PREVIEW

Gain complete access to the largest collection of worksheets in all subjects!

Members, please log in to download this worksheet.

Not a member? Please sign up to gain complete access.

www.mathworksheets4kids.com



Volume = _____

7) The base of a pyramid is a rectangle with a length of 23 cm, what is its volume?

_____ of the height of the pyramid

8) Determine the volume of a cone whose radius is 12 m and height is 5 m. (use $\pi = 3.14$)