

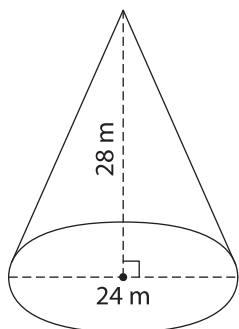
Name : \_\_\_\_\_

## Volume - Mixed Shapes

Integers: L2S1

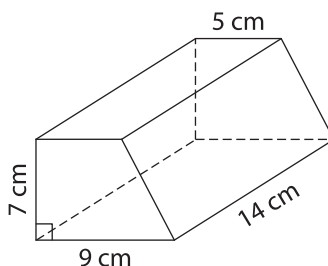
Find the volume of each shape. Round your answer to two decimal places. (use  $\pi = 3.14$ )

1)

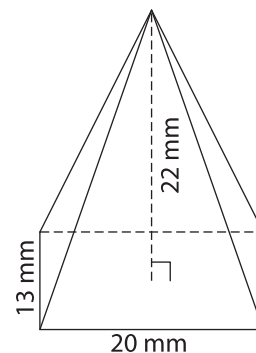


Volume = \_\_\_\_\_

2)

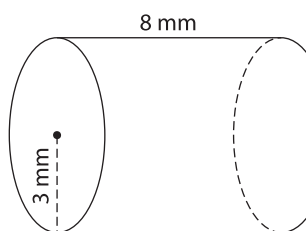


3)



Volume = \_\_\_\_\_

4)



Volume = \_\_\_\_\_

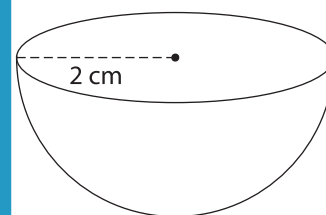
**PREVIEW**

Gain complete access to the largest collection of worksheets in all subjects!

Members, please log in to download this worksheet.

Not a member? Please sign up to gain complete access.

[www.mathworksheets4kids.com](http://www.mathworksheets4kids.com)



Volume = \_\_\_\_\_

7) The height of a cone is 15

Volume. (use  $\pi = 3.14$ )

8) The height of a square prism is 19 cm. If the sidelength of the base square is 23 cm, find the volume of the prism.