

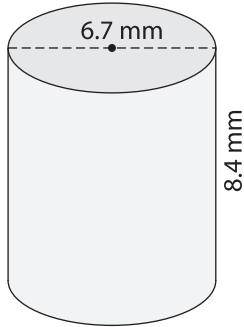
Name : \_\_\_\_\_

## Volume - Prisms and Cylinders

Decimals: L2S1

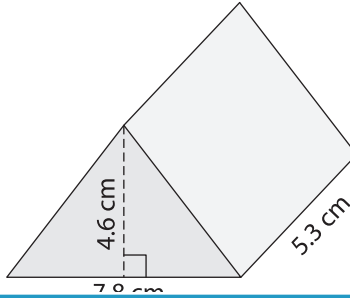
Find the volume of each shape. Round your answer to two decimal places. (use  $\pi = 3.14$ )

1)

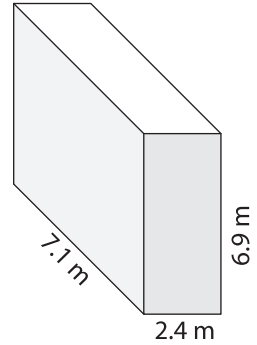


Volume = \_\_\_\_\_

2)

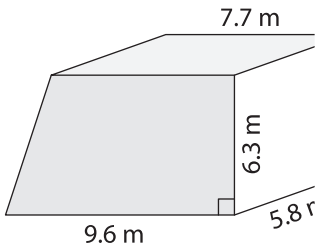


3)



Volume = \_\_\_\_\_

4)



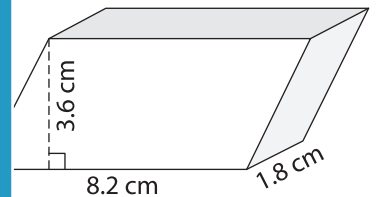
Volume = \_\_\_\_\_

**PREVIEW**  
Gain complete access to the largest  
collection of worksheets in all subjects!

Members, please  
log in to  
download this  
worksheet.

Not a member?  
Please sign up to  
gain complete  
access.

[www.mathworksheets4kids.com](http://www.mathworksheets4kids.com)



Volume = \_\_\_\_\_

7) The height of a cylinder is \_\_\_\_\_.  
Find its volume. Round your  
answer to two decimal places.

\_\_\_\_\_

8) The base of a prism is a triangle with a base of 4.3 m and a height of 2.7 m. Determine the volume of the prism, if its height is 6.1 m. Round your answer to two decimal places.

\_\_\_\_\_