

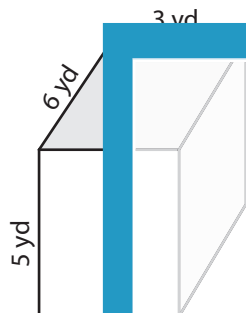
Name : _____

Volume - Rectangular Prism

Sheet 3

Find the volume of each rectangular prism.

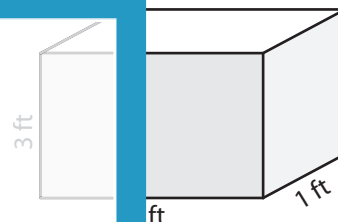
1)



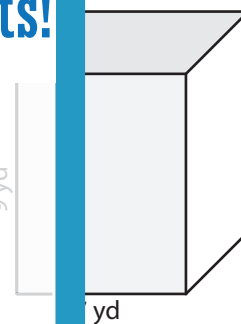
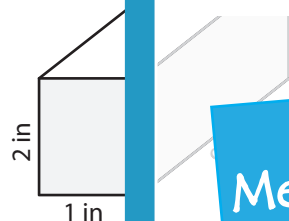
2)



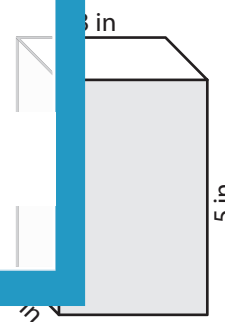
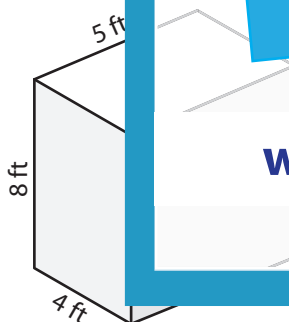
3)



4)



7)



PREVIEW

Gain complete access to the largest
collection of worksheets in all subjects!

Members, please
log in to
download this
worksheet.

Not a member?
Please sign up to
gain complete
access.

www.mathworksheets4kids.com