

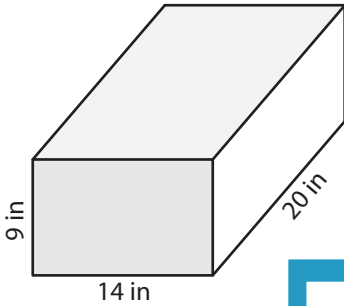
Name : _____

Volume - Rectangular Prism

ES3

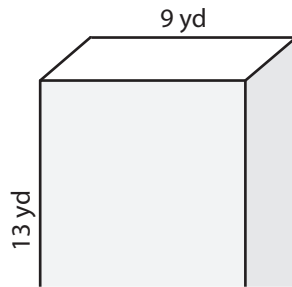
A) Find the volume of each rectangular prism.

1)



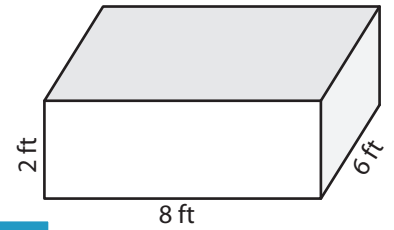
Volume = _____

2)



Volume = _____

3)



Volume = _____

B) Find the volume of each rectangular prism.

4) height = 4 yd ; length = _____

Volume = _____

6) height = 16 ft ; width = _____

Volume = _____

Gain complete access to the largest collection of worksheets in all subjects!

Members, please log in to download this worksheet.

Not a member? Please sign up to gain complete access.

www.mathworksheets4kids.com

Volume = _____

8) The length, width and height of a rectangular prism are 18 inches, 10 inches and 15 inches respectively. What is its volume?

Name : _____

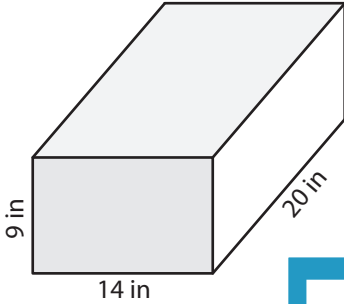
Answer key

Volume - Rectangular Prism

ES3

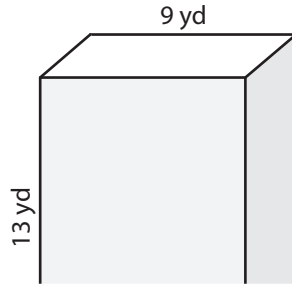
A) Find the volume of each rectangular prism.

1)

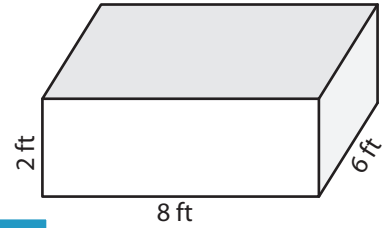


Volume = 2,520 in³

2)



3)



Volume = 96 ft³

B) Find the volume of each rectangular prism.

4) height = 4 yd ; length = 10 yd ; width = 19 yd

Volume = 760 yd³

6) height = 16 ft ; width = 10 ft ; length = 11 ft

Volume = 288 ft³

Volume = 1,020 yd³

8) The length, width and height of a rectangular prism are 18 inches, 10 inches and 15 inches respectively. What is its volume?

2,700 cubic inches

PREVIEW

Gain complete access to the largest collection of worksheets in all subjects!

Members, please log in to download this worksheet.

Not a member? Please sign up to gain complete access.

www.mathworksheets4kids.com