

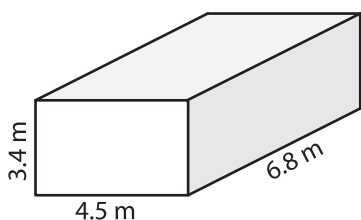
Name : _____

Volume - Rectangular Prism

Decimals: S1

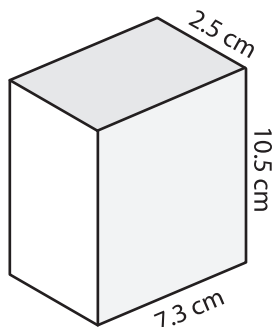
A) Find the volume of each rectangular prism. Round your answer to two decimal places.

1)



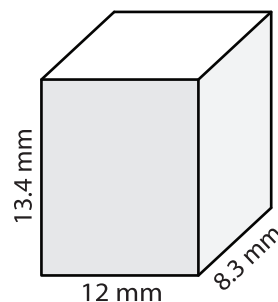
Volume = _____

2)



Volume = _____

3)



Volume = _____

B) Find the volume of each rectangular prism from the given parameters. Round your answer to two decimal places.

4) length = 11.7 cm ; height = 14.1 cm ;
width = 9.2 cm

Volume = _____

5) height = 7 m ; width = 12.6 m ; length = 15.1 m

Volume = _____

6) width = 2.4 mm ; length = 6.1 mm ;
height = 8.5 mm

Volume = _____

7) length = 10.9 cm ; width = 9.9 cm ;
height = 16.3 cm

Volume = _____

8) The length, width and height of a rectangular prism are 20 m, 7.6 m and 15.4 m respectively. What is its volume?
