

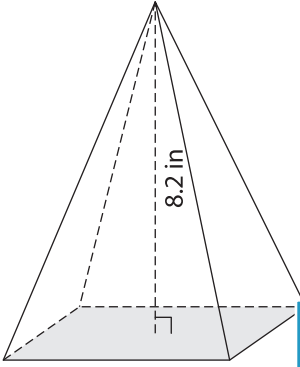
Name : _____

Decimals: S1

Volume - Rectangular Pyramid

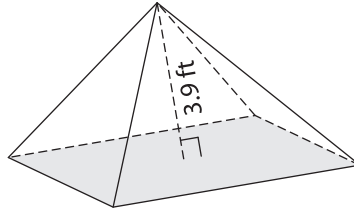
Find the volume of each rectangular pyramid. Round your answer to two decimal places.

1) Base area = 12.9 in^2



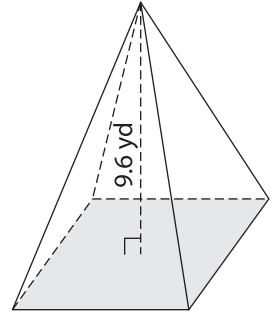
Volume = _____

2) Base area = 41.78 ft^2

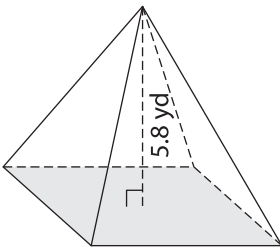


Volume = _____

3) Base area = 56 yd^2

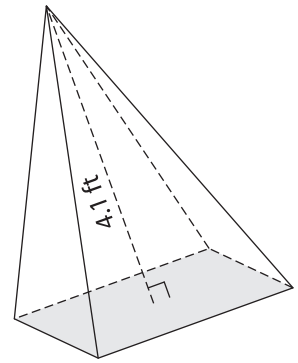


4) Base area = 6.46 yd^2



Volume = _____

Base area = 32.23 ft^2



Volume = _____

7) A rectangular pyramid has a base area of 12.5 yd^2 and a height of 2.7 yd . Round your answer to two decimal places.

Base area = 12.5 yd^2 and height = 2.7 yd . What is its volume?

8) Find the volume of the rectangular pyramid with a base area of $61.64 \text{ square yards}$ and a height of 2.7 yards . Round your answer to two decimal places.

PREVIEW

Gain complete access to the largest collection of worksheets in all subjects!

Members, please log in to download this worksheet.

Not a member? Please sign up to gain complete access.

www.mathworksheets4kids.com