

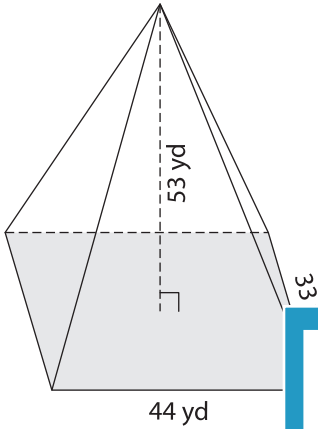
Name : _____

Volume - Rectangular Pyramid

MS3

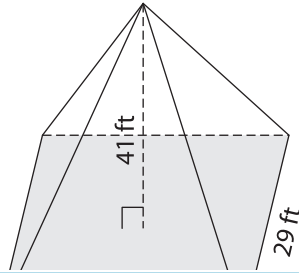
A) Find the volume of each rectangular pyramid. Round your answer to two decimal places.

1)

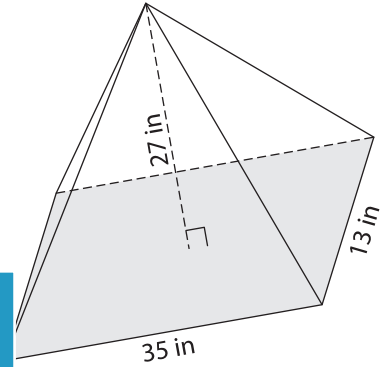


Volume = _____

2)



3)



Volume = _____

B) Find the volume of each rectangular pyramid. Round your answer to two decimal places.

4) width = 37 yd ; height = 48 yd

Volume = _____

6) height = 39 in ; length = 50 in ; width = 15 in

Volume = _____

PREVIEW
Gain complete access to the largest collection of worksheets in all subjects!

Members, please log in to download this worksheet.

Not a member? Please sign up to gain complete access.

www.mathworksheets4kids.com

5) length = 58 ft ; width = 23 ft ; height = 23 ft

Volume = _____

7) length = 31 yd ; width = 24 yd ; height = 24 yd

Volume = _____

8) Determine the volume of a rectangular pyramid whose length, width and height are 46 feet, 40 feet and 25 feet respectively. Round your answer to two decimal places.
