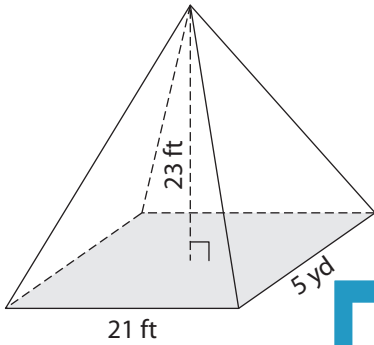


Name : _____

Volume - Rectangular Pyramid

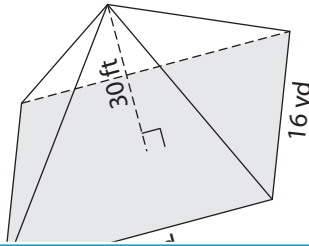
A) Find the volume of each rectangular pyramid. Round your answer to two decimal places.

1)

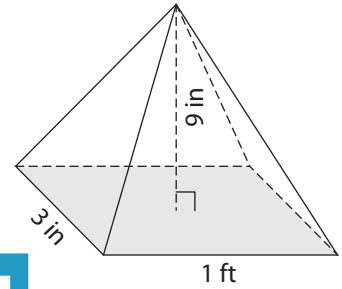


Volume = _____

2)



3)



Volume = _____ in³

B) Find the volume of each rectangular pyramid. Round your answer to two decimal places.

4) length = 6 ft ; width = 24 ft ; height = 10 ft

Volume = _____

6) width = 17 in ; height = 24 in ; length = 10 ft

Volume = _____ in³

PREVIEW

Gain complete access to the largest collection of worksheets in all subjects!

Members, please log in to download this worksheet.

Not a member? Please sign up to gain complete access.

www.mathworksheets4kids.com

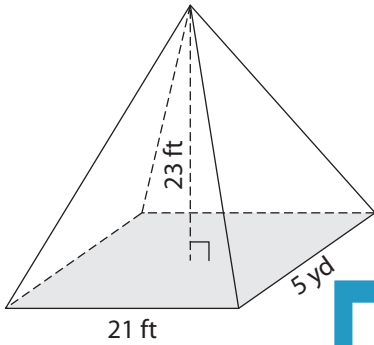
Volume = _____ ft³

8) A rectangular pyramid has a length of 13 yards, a width of 8 yards and a height of 24 inches. Find the volume of the pyramid in cubic yards. Round your answer to two decimal places.

Volume - Rectangular Pyramid

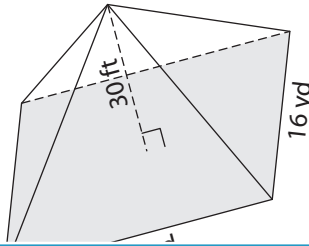
A) Find the volume of each rectangular pyramid. Round your answer to two decimal places.

1)

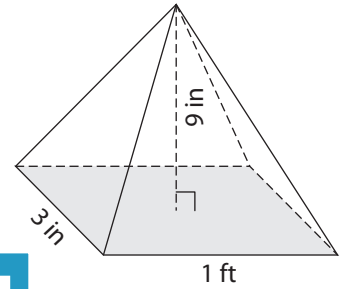


Volume = 2,415

2)



3)



Volume = 108 in³

B) Find the volume of each rectangular pyramid. Round your answer to two decimal places.

4) length = 6 ft ; width = 24 ft ; height = 11 ft

Volume = 44

6) width = 17 in ; height = 24 in ; length = 10 ft

Volume = 20,400 in³

5) length = 23 ft ; width = 7 yd ; height = 10 ft

Volume = 1,56 yd³

7) length = 10 ft ; width = 19 in ; height = 24 in

Volume = 26.39 ft³

8) A rectangular pyramid has a length of 13 yards, a width of 8 yards and a height of 24 inches. Find the volume of the pyramid in cubic yards. Round your answer to two decimal places.

23.11 cubic yards

PREVIEW

Gain complete access to the largest collection of worksheets in all subjects!

Members, please log in to download this worksheet.

Not a member? Please sign up to gain complete access.

www.mathworksheets4kids.com