

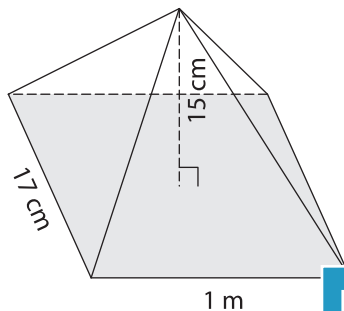
Name : _____

Volume - Rectangular Pyramid

Sheet 1

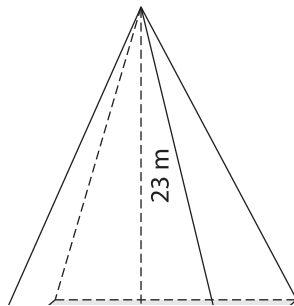
A) Find the volume of each rectangular pyramid. Round your answer to two decimal places.

1)

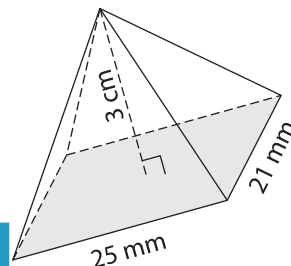


Volume = _____

2)



3)



Volume = _____ mm³

B) Find the volume of each rectangular pyramid. Round your answer to two decimal places.

4) width = 3 cm ; height = 4 cm

Volume = _____

6) height = 9 cm ; length = 10 cm

Volume = _____ mm³

Gain complete access to the largest collection of worksheets in all subjects!

Members, please log in to download this worksheet.

Not a member? Please sign up to gain complete access.

www.mathworksheets4kids.com

Volume = _____ cm³

8) The length, width and height of a rectangular pyramid are 1 m, 6 cm and 20 cm respectively. What is the volume of the rectangular pyramid in cm³?
