

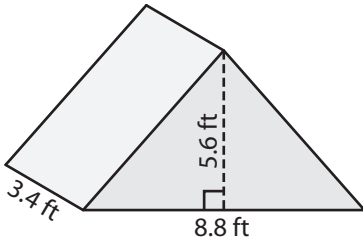
Name : _____

Volume - Triangular Prism

Decimals: S2

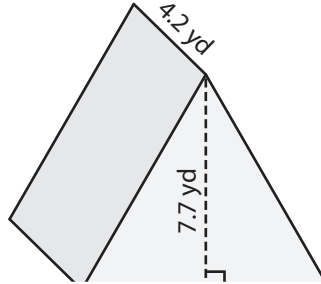
Find the volume of each triangular prism. Round your answer to two decimal places.

1)

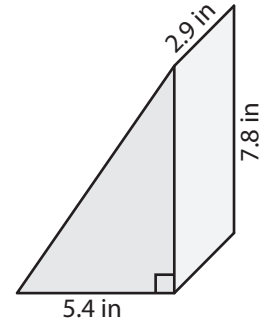


Volume = _____

2)

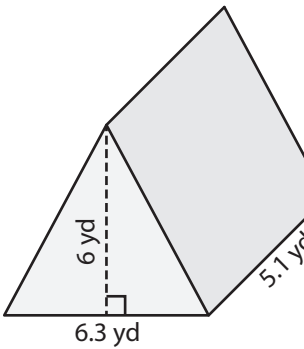


3)

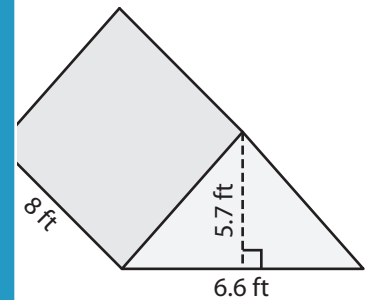


Volume = _____

4)



Volume = _____



Volume = _____

7) The base of a prism is a triangle with a base length of 2.2 yards. Round

Find the volume if its

PREVIEW

Gain complete access to the largest collection of worksheets in all subjects!

Members, please log in to download this worksheet.

Not a member? Please sign up to gain complete access.

www.mathworksheets4kids.com

8) The base of a prism is a right triangle with legs measuring 5.2 inches and 7.4 inches. If the height of the prism is 1.5 inches, determine its volume.

Name : _____

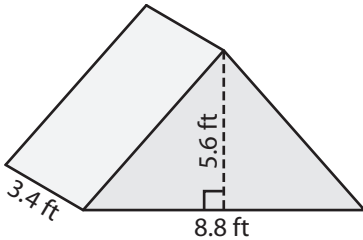
Answer key

Decimals: S2

Volume - Triangular Prism

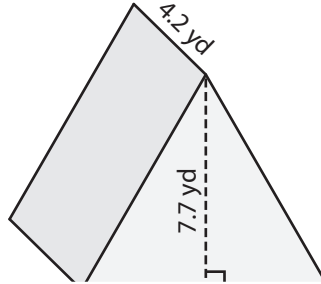
Find the volume of each triangular prism. Round your answer to two decimal places.

1)

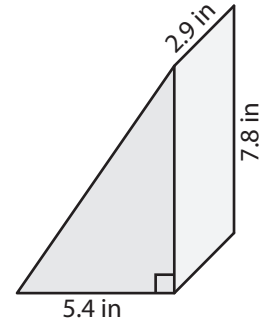


Volume = 83.78 ft³

2)

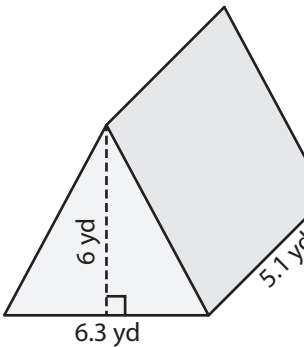


3)



Volume = 61.07 in³

4)



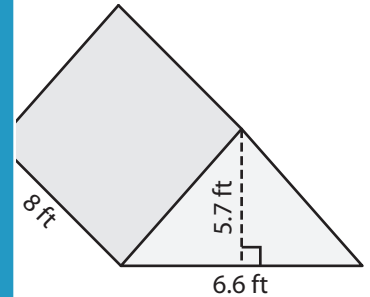
Volume = 96.39 yd³

Gain complete access to the largest collection of worksheets in all subjects!

Members, please log in to download this worksheet.

Not a member? Please sign up to gain complete access.

www.mathworksheets4kids.com



Volume = 150.48 ft³

7) The base of a prism is a triangle with a base length of 2.2 yards. Round

29.52 cubic yards

Find the volume if its

8) The base of a prism is a right triangle with legs measuring 5.2 inches and 7.4 inches. If the height of the prism is 1.5 inches, determine its volume.

28.86 cubic inches