

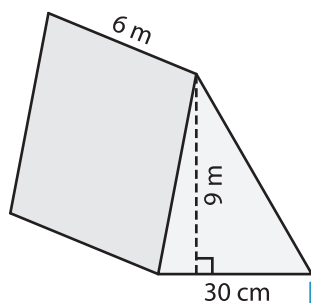
Name : _____

Volume - Triangular Prism

Sheet 1

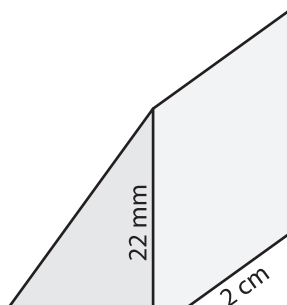
Find the volume of each triangular prism.

1)

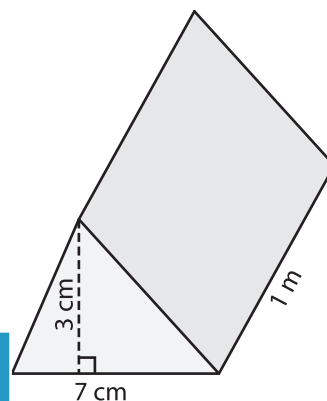


Volume = _____

2)

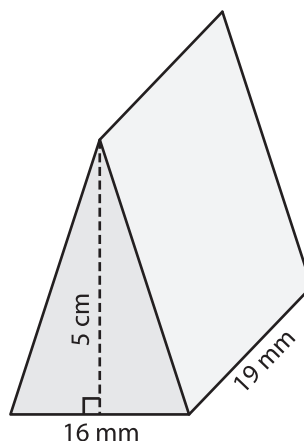


3)



Volume = _____ cm^3

4)



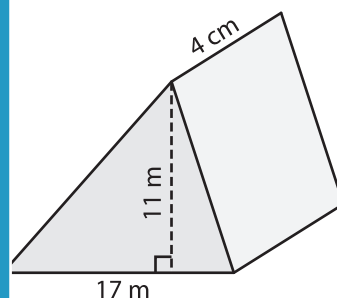
Volume = _____

PREVIEW
Gain complete access to the largest
collection of worksheets in all subjects!

Members, please
log in to
download this
worksheet.

Not a member?
Please sign up to
gain complete
access.

www.mathworksheets4kids.com



Volume = _____ m^3

7) The base of a prism is a right triangle with a base of 20 m, find its volume in m^3

the height of the prism is _____

8) The base of a prism is a triangle with a base of 13 mm and a height of 25 mm. Determine the volume in mm^3 if its length is 3 cm.
