

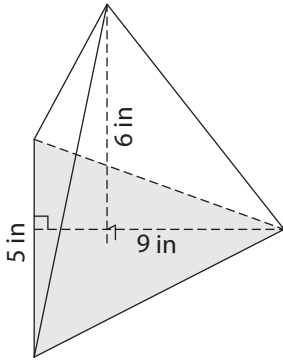
Name : _____

Volume - Triangular Pyramid

ES3

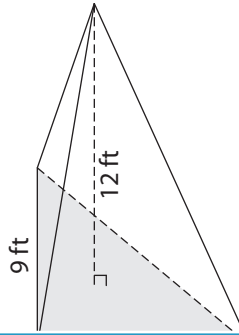
Find the volume of each triangular pyramid. Round your answer to two decimal places.

1)

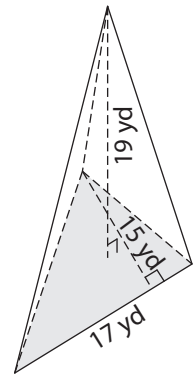


Volume = _____

2)

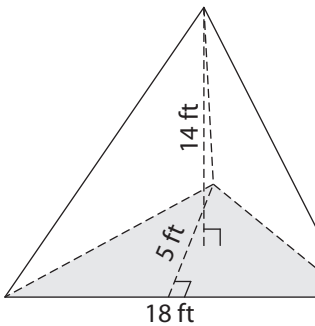


3)



Volume = _____

4)



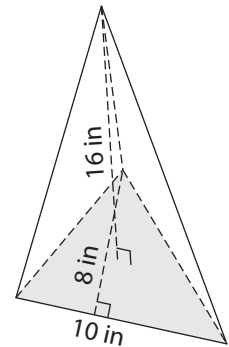
Volume = _____

Gain complete access to the largest collection of worksheets in all subjects!

Members, please log in to download this worksheet.

Not a member? Please sign up to gain complete access.

www.mathworksheets4kids.com



Volume = _____

7) The base of a pyramid is a triangle with a base of 12 ft and a height of 5 ft. Find the volume of the pyramid, if its height is 3 ft.

Find the volume of the

8) The base of a pyramid is a triangle with a base of 20 yards and a height of 9 yards. Determine the volume of the pyramid, if its height is 4 yards.

Name : _____

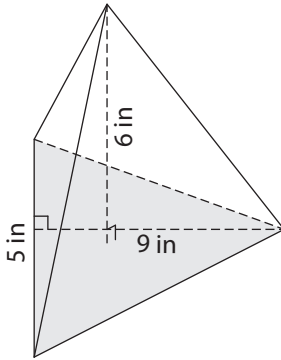
Answer key

Volume - Triangular Pyramid

ES3

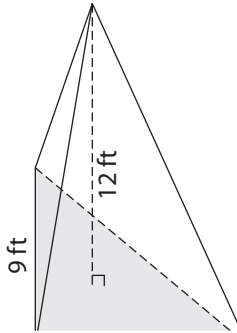
Find the volume of each triangular pyramid. Round your answer to two decimal places.

1)

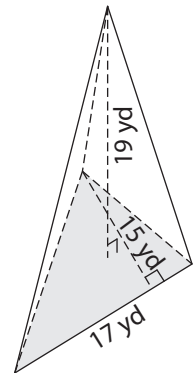


Volume = 45 in³

2)

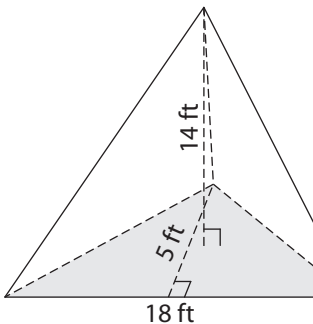


3)



Volume = 807.5 yd³

4)



Volume = 210 ft³

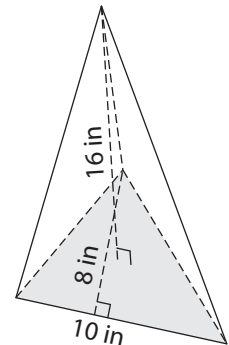
PREVIEW

Gain complete access to the largest collection of worksheets in all subjects!

Members, please log in to download this worksheet.

Not a member? Please sign up to gain complete access.

www.mathworksheets4kids.com



Volume = 213.33 in³

7) The base of a pyramid is a triangle with a base of 10 feet and a height of 7 feet. Find the volume of the pyramid, if its height is 3 feet.

Find the volume of the

32.5 cubic feet

8) The base of a pyramid is a triangle with a base of 20 yards and a height of 9 yards. Determine the volume of the pyramid, if its height is 4 yards.

120 cubic yards