




Weight Estimation - Metric Units

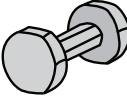


Sheet 1

Choose the object close to the given weight.



1) 3 kilograms

- 
- 
- 

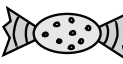


2) 150 grams

- 
- 
- 




3) 100 grams

- 
- 
- 




4) 1 kilogram

- 
- 
- 




5) 1.5 kilograms

- 
- 
- 




6) 700 grams

- 
- 
- 

7) 5 grams

- 
- 
- 

8) 2 kilograms




- 
- 
- 

Answer key**Weight Estimation - Metric Units**

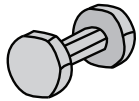


Sheet 1

Choose the object close to the given weight.




1) 3 kilograms

- 
- 
- 

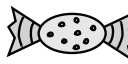


2) 150 grams

- 
- 
- 




3) 100 grams

- 
- 
- 




4) 1 kilogram

- 
- 
- 




5) 1.5 kilograms

- 
- 
- 



6) 700 grams

- 
- 
- 

7) 5 grams

- 
- 
- 

8) 2 kilograms

- 
- 
- 