




Weight Estimation - Metric Units

Sheet 2

Choose the object close to the given weight.



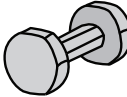
1) 1.5 kilograms

- 
- 
- 

2) 2 kilograms

- 
- 
- 

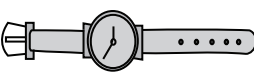
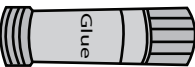

3) 2 grams

- 
- 
- 

5) 15 grams

- 
- 
- 

7) 1 kilogram

- 
- 
- 

8) 1 gram

- 
- 
- 

PREVIEW

Access the largest collection of
worksheets for just **\$19.95** per year!

Members, please
log in to
download this
worksheet.

Log in

Not a member?
Please sign up to
gain complete
access.

Sign up




www.mathworksheets4kids.com

Answer key**Weight Estimation - Metric Units**


Sheet 2

Choose the object close to the given weight.



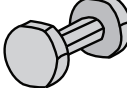
1) 1.5 kilograms

- 
- 
- 

2) 2 kilograms

- 
- 
- 

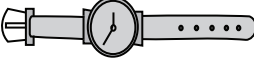

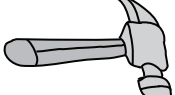
3) 2 grams

- 
- 
- 




5) 15 grams

- 
- 
- 

7) 1 kilogram

- 
- 
- 

8) 1 gram

- 
- 
- 

PREVIEW

Access the largest collection of
worksheets for just **\$19.95** per year!

Members, please
log in to
download this
worksheet.

Log in

Not a member?
Please sign up to
gain complete
access.

Sign up

www.mathworksheets4kids.com