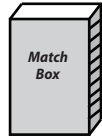


**Weight Estimation**

Metric Units: S2


Estimate the weight of each object.

1)



- 4 g
- 400 g
- 40 g

2)



- 2 kg
- 200 g
- 20 g

3)



- 2 kg
- 20 g



- 50 kg

5)



- 3 kg
- 30 g



- 50 g

# PREVIEW

Access the largest collection of  
worksheets for just **\$19.95** per year!

Members, please  
log in to  
download this  
worksheet.

**Log in**

Not a member?  
Please sign up to  
gain complete  
access.

**Sign up**

[www.mathworksheets4kids.com](http://www.mathworksheets4kids.com)

7)



- 25 g
- 250 g
- 2.5 kg

8)



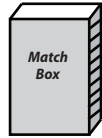
- 20 g
- 2 g
- 200 g

**Weight Estimation**

Metric Units: S2


Estimate the weight of each object.

1)



- 4 g
- 400 g
- **40 g**

2)



- **2 kg**
- 200 g
- 20 g

3)



- 2 kg
- **20 g**



- 50 kg

5)



- **3 kg**
- 30 g



- 50 g

# PREVIEW

Access the largest collection of worksheets for just **\$19.95** per year!

Members, please log in to download this worksheet.

**Log in**

Not a member? Please sign up to gain complete access.

**Sign up**

[www.mathworksheets4kids.com](http://www.mathworksheets4kids.com)

7)



- 25 g
- 250 g
- **2.5 kg**

8)



- 20 g
- **2 g**
- 200 g