

Weight Estimation

Metric Units: S3


Estimate the weight of each object.

1)



- 1 kg
- 100 g
- 10 g

2)



- 7 kg
- 7 g
- 70 g

3)



- 6 g
- 60 g

PREVIEW

Access the largest collection of
worksheets for just **\$19.95** per year!

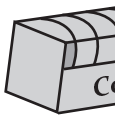
Members, please
log in to
download this
worksheet.

Log in

Not a member?
Please sign up to
gain complete
access.

Sign upwww.mathworksheets4kids.com

5)




- 200 g
- 2 kg

7)



- 2 g
- 20 g
- 2 kg

8)



- 50 g
- 5 g
- 500 g

Weight Estimation

Metric Units: S3


Estimate the weight of each object.

1)



- **1 kg**
- 100 g
- 10 g

2)



- 7 kg
- 7 g
- **70 g**

3)



- 6 g
- **60 g**

PREVIEW

Access the largest collection of worksheets for just **\$19.95** per year!

Members, please log in to download this worksheet.

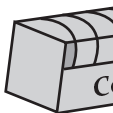
Log in

Not a member? Please sign up to gain complete access.

Sign upwww.mathworksheets4kids.com

- 8 kg

5)



- **200 g**
- 2 kg




- **kg**
- 40 g

7)



- 2 g
- 20 g
- **2 kg**

8)



- **50 g**
- 5 g
- 500 g