

**Weight - More/Less**

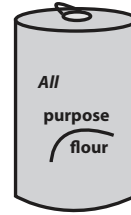
Choose the correct choice that describes the weight of each object.

1)



More than 2 lb       Less than 2 lb

2)



More than 3 oz       Less than 3 oz

3)



More than 5 lb

4)



Less than 4 oz

5)



More than 5 oz

# PREVIEW

Access the largest collection of  
worksheets for just **\$19.95** per year!

Members, please  
log in to  
download this  
worksheet.

**Log in**

Not a member?  
Please sign up to  
gain complete  
access.

**Sign up**

[www.mathworksheets4kids.com](http://www.mathworksheets4kids.com)



Less than 15 lb

7)

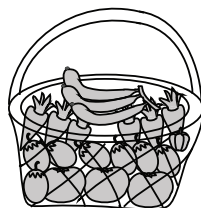


More than 1 lb       Less than 1 lb




More than 10 oz       Less than 10 oz

9)



More than 2 oz       Less than 2 oz

10)



More than 25 oz       Less than 25 oz

**Weight - More/Less**

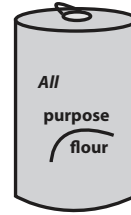
Choose the correct choice that describes the weight of each object.

1)



- More than 2 lb     Less than 2 lb

2)



- More than 3 oz     Less than 3 oz

3)



- More than 5 lb

4)



- Less than 4 oz

5)



- More than 5 oz



- Less than 15 lb

7)

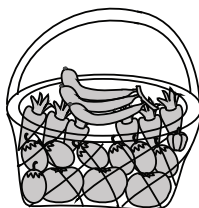


- More than 1 lb     Less than 1 lb




- More than 10 oz     Less than 10 oz

9)



- More than 2 oz     Less than 2 oz

10)



- More than 25 oz     Less than 25 oz

**PREVIEW**

Access the largest collection of  
worksheets for just **\$19.95** per year!

Members, please  
log in to  
download this  
worksheet.

**Log in**

Not a member?  
Please sign up to  
gain complete  
access.

**Sign up**

[www.mathworksheets4kids.com](http://www.mathworksheets4kids.com)