


Weight - More/Less

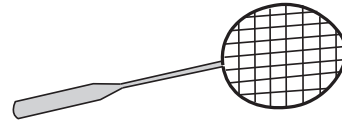
Choose the correct choice that describes the weight of each object.

1)



More than 2 oz Less than 2 oz

2)



More than 15 lb Less than 15 lb

3)



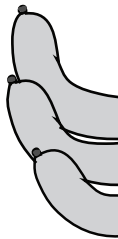
More than 9 oz

4)



Less than 10 oz

5)



More than 3 lb



Less than 2 oz

7)




More than 6 oz Less than 6 oz




More than 1 lb Less than 1 lb

9)



More than 4 oz Less than 4 oz

10)



More than 10 lb Less than 10 lb

PREVIEW

Access the largest collection of
worksheets for just **\$19.95** per year!

Members, please
log in to
download this
worksheet.

Log in

Not a member?
Please sign up to
gain complete
access.


Sign up

www.mathworksheets4kids.com

Weight - More/Less

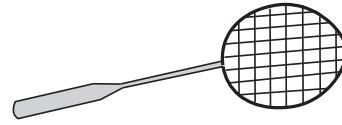
Choose the correct choice that describes the weight of each object.

1)



More than 2 oz Less than 2 oz

2)



More than 15 lb Less than 15 lb

3)



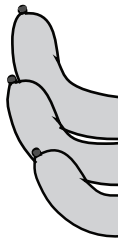
More than 9 oz

4)



Less than 10 oz

5)



More than 3 lb



Less than 2 oz

7)




More than 6 oz Less than 6 oz




More than 1 lb Less than 1 lb

9)



More than 4 oz Less than 4 oz

10)



More than 10 lb Less than 10 lb

PREVIEW

Access the largest collection of worksheets for just **\$19.95** per year!

Members, please log in to download this worksheet.

Log in

Not a member? Please sign up to gain complete access.

Sign up

www.mathworksheets4kids.com