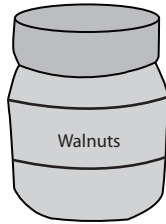


Weight - More/Less

Choose the correct choice that describes the weight of each object.

1)



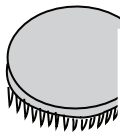
More than 20 lb Less than 20 lb

2)



More than 2 oz Less than 2 oz

3)



More than 15 oz

4)



Less than 3 lb

5)



More than 2 oz

Access the largest collection of worksheets for just **\$19.95** per year!

Members, please log in to download this worksheet.

Log in

Not a member? Please sign up to gain complete access.

Sign up

www.mathworksheets4kids.com



Less than 8 lb

7)

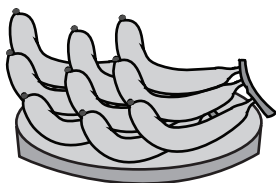


More than 4 lb Less than 4 lb



More than 20 oz Less than 20 oz

9)



More than 1 lb Less than 1 lb

10)

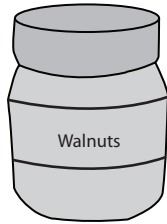


More than 1 oz Less than 1 oz

Weight - More/Less

Choose the correct choice that describes the weight of each object.

1)



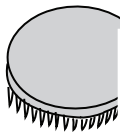
More than 20 lb Less than 20 lb

2)



More than 2 oz Less than 2 oz

3)



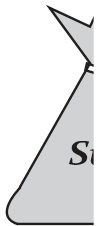
More than 15 oz

4)



Less than 3 lb

5)



More than 2 oz

PREVIEW
Access the largest collection of worksheets for just **\$19.95** per year!

Members, please log in to download this worksheet.

Log in

Not a member? Please sign up to gain complete access.

Sign up

www.mathworksheets4kids.com



Less than 8 lb

7)

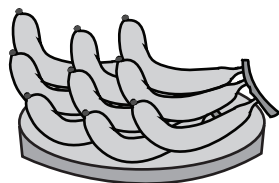


More than 4 lb Less than 4 lb



More than 20 oz Less than 20 oz

9)



More than 1 lb Less than 1 lb

10)



More than 1 oz Less than 1 oz