

**Weight - More/Less**

Metric Units: S2

Choose the correct choice that describes the weight of each object.

1)


 More than 3 kg     Less than 3 kg

2)


 More than 20 g     Less than 20 g

3)


 More than 1 kg

4)


 Less than 150 g

5)


 More than 30 g

 Less than 50 g

7)

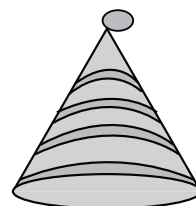

 More than 200 g     Less than 200 g

 More than 5 kg     Less than 5 kg

9)


 More than 25 g     Less than 25 g

10)


 More than 2 kg     Less than 2 kg

**PREVIEW**

Access the largest collection of  
worksheets for just **\$19.95** per year!

Members, please  
log in to  
download this  
worksheet.

**Log in**

Not a member?  
Please sign up to  
gain complete  
access.

**Sign up**


[www.mathworksheets4kids.com](http://www.mathworksheets4kids.com)

## Weight - More/Less


Metric Units: S2

Choose the correct choice that describes the weight of each object.

1)


 More than 3 kg     Less than 3 kg

2)


 More than 20 g     Less than 20 g

3)


 More than 1 kg

4)


 Less than 150 g

5)


 More than 30 g

**PREVIEW**

Access the largest collection of worksheets for just **\$19.95** per year!

Members, please log in to download this worksheet.

**Log in**

Not a member? Please sign up to gain complete access.

**Sign up**

[www.mathworksheets4kids.com](http://www.mathworksheets4kids.com)


 Less than 50 g

7)

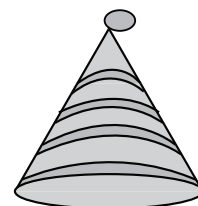

 More than 200 g     Less than 200 g

 More than 5 kg     Less than 5 kg

9)


 More than 25 g     Less than 25 g

10)


 More than 2 kg     Less than 2 kg