

Weight - More/Less

Metric Units: S3

Choose the correct choice that describes the weight of each object.

1)



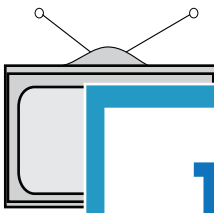
More than 10 kg Less than 10 kg

2)



More than 250 g Less than 250 g

3)



More than 1 kg

4)



Less than 2 kg

5)



More than 20 g

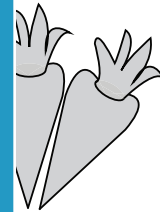


Less than 10 g

7)




More than 5 kg Less than 5 kg



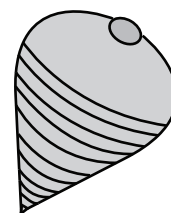
More than 100 g Less than 100 g

9)



More than 700 g Less than 700 g

10)



More than 5 g Less than 5 g

PREVIEW

Access the largest collection of
worksheets for just **\$19.95** per year!

Members, please
log in to
download this
worksheet.

Log in

Not a member?
Please sign up to
gain complete
access.

Sign up

www.mathworksheets4kids.com

Weight - More/Less

Metric Units: S3

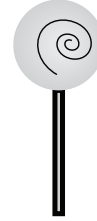
Choose the correct choice that describes the weight of each object.

1)



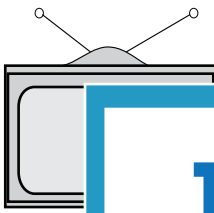
More than 10 kg Less than 10 kg

2)



More than 250 g Less than 250 g

3)



More than 1 kg

4)



Less than 2 kg

5)



More than 20 g

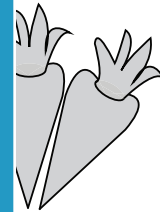


Less than 10 g

7)




More than 5 kg Less than 5 kg



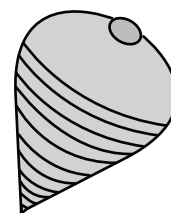
More than 100 g Less than 100 g

9)



More than 700 g Less than 700 g

10)



More than 5 g Less than 5 g

PREVIEW

Access the largest collection of
worksheets for just **\$19.95** per year!

Members, please
log in to
download this
worksheet.

Log in

Not a member?
Please sign up to
gain complete
access.

Sign up

www.mathworksheets4kids.com