


Measuring Weight - Metric Units

DS3

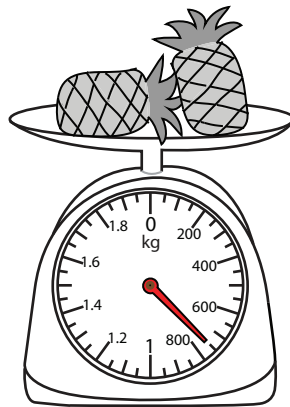
Measure the weight of each object.

1)




_____ g

2)



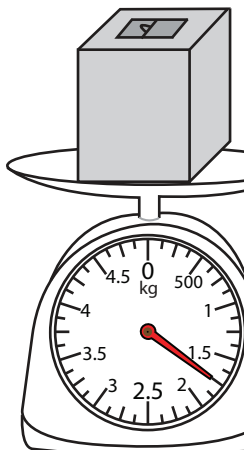
_____ kg

3)

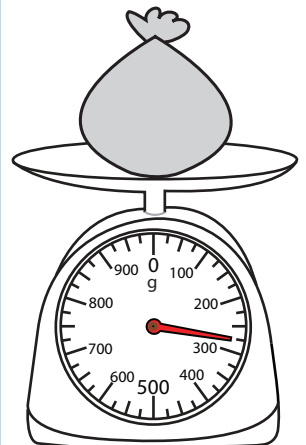


_____ kg

4)



_____ kg



_____ g

PREVIEW

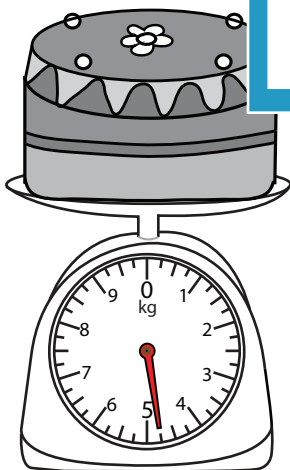
Access the largest collection of worksheets for just **\$19.95** per year!

Members, please log in to download this worksheet. **Log in**

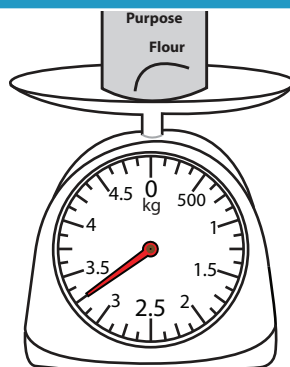
Not a member? Please sign up to gain complete access. **Sign up**

www.mathworksheets4kids.com

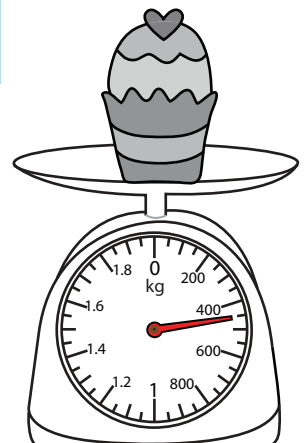
7)



_____ kg



_____ kg




_____ g

Measuring Weight - Metric Units

DS3

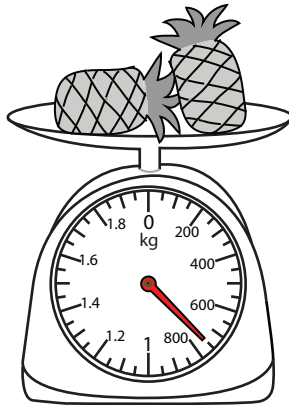
Measure the weight of each object.

1)



225


2)



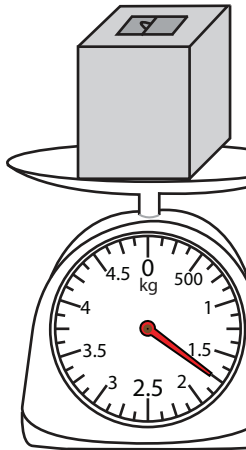
4.125

kg

3)



4)



1.75

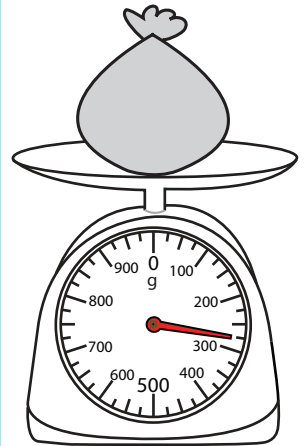
PREVIEW

Access the largest collection of worksheets for just **\$19.95** per year!

Members, please log in to download this worksheet. **Log in**

Not a member? Please sign up to gain complete access. **Sign up**

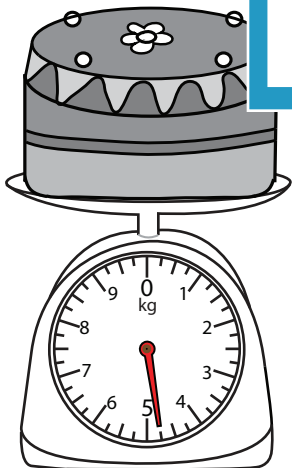
www.mathworksheets4kids.com



275

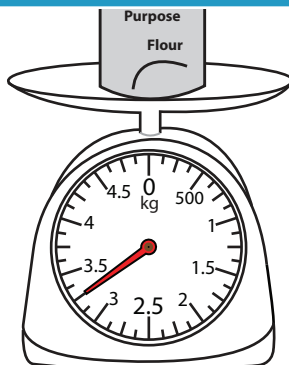
g

7)



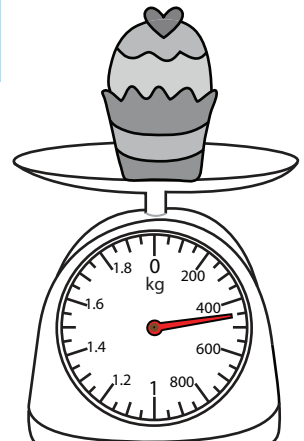
4.75

kg



3.25

kg



450

g