


Weight Calculation - Customary Units

Calculate the weight.

1)



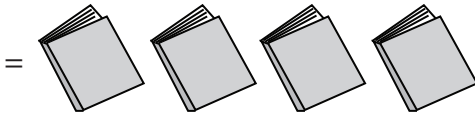
Weight of each  = _____ lb

2)



Weight of each  = _____ oz

3)




Weight of each  = _____ lb

4)



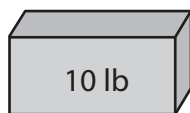
Weight of each  = _____ oz

5)



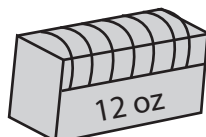
Weight of each  = _____ lb

6)



Weight of each  = _____ lb

7)




Weight of each  = _____ oz

Weight Calculation - Customary Units

Calculate the weight.

1)



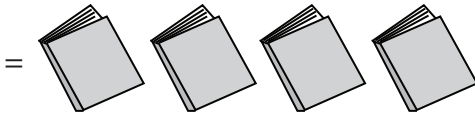
Weight of each  = 3 lb

2)



Weight of each  = 5 oz

3)




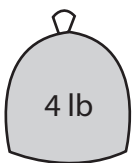
Weight of each  = 2 lb

4)



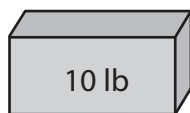
Weight of each  = 4 oz

5)



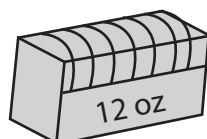
Weight of each  = 1 lb

6)



Weight of each  = 2 lb

7)



Weight of each  = 3 oz