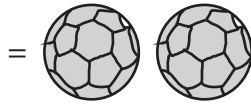



Weight Calculation - Customary Units

Calculate the weight.

1)



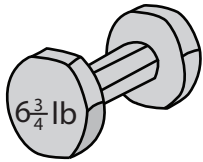
Weight of each = _____ lb

2)



Weight of each = _____ oz

3)



=

PREVIEW

Access the largest collection of
worksheets for just **\$19.95** per year!

Members, please
log in to
download this
worksheet.

Log in

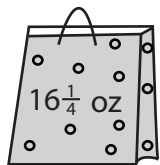
Not a member?
Please sign up to
gain complete
access.

Sign up

www.mathworksheets4kids.com

ch = _____ lb

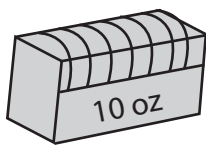
4)



=

ch = _____ oz

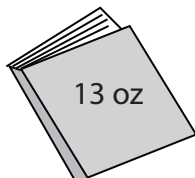
5)



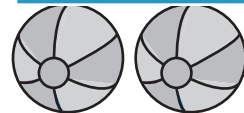
=

ch = _____ oz

6)



=



Weight of each = _____ oz

7)



=

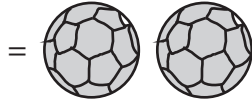



Weight of each = _____ oz

Weight Calculation - Customary Units

Calculate the weight.

1)



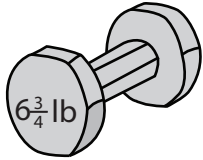
Weight of each = 3/4 lb

2)



Weight of each = 10 1/4 oz

3)



=

PREVIEW

Access the largest collection of
worksheets for just **\$19.95** per year!

Members, please
log in to
download this
worksheet.

Log in

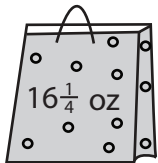
Not a member?
Please sign up to
gain complete
access.

Sign up

www.mathworksheets4kids.com

ch = 2 1/4 lb

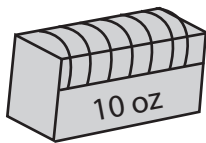
4)



=

ch = 3 1/4 oz

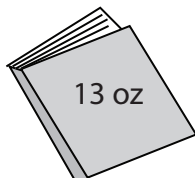
5)



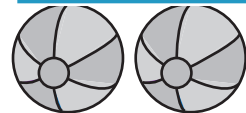
=

ch = 2 1/2 oz

6)



=



Weight of each = 6 1/2 oz

7)



=



Weight of each = 8 1/2 oz