




Weight Calculation - Metric Units

ES3

Calculate the weight.

1)  =  Weight of each  = _____ g

2)  =  Weight of each  = _____ g

3)  = () _____ kg

4)  = () _____ g

5)  = () _____ kg

6)  =  Weight of each  = _____ g

7)  =  Weight of each  = _____ g

PREVIEW

Access the largest collection of
worksheets for just **\$19.95** per year!

Members, please
log in to
download this
worksheet.

Log in

Not a member?
Please sign up to
gain complete
access.

Sign up




www.mathworksheets4kids.com

Weight Calculation - Metric Units

ES3

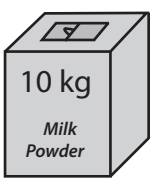


Calculate the weight.

1)  =  Weight of each  = **250** g

2)  =  Weight of each  = **150** g

3)  = () ch  = **1½** kg

4)  = () ch  = **100** g

5)  = () ch  = **2** kg

6)  =  Weight of each  = **250** g

7)  =  Weight of each  = **500** g

PREVIEW

Access the largest collection of
worksheets for just **\$19.95** per year!

Members, please
log in to
download this
worksheet.

Log in

Not a member?
Please sign up to
gain complete
access.

Sign up

www.mathworksheets4kids.com